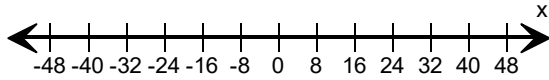
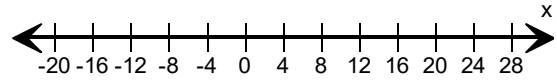


Graph the inequality.

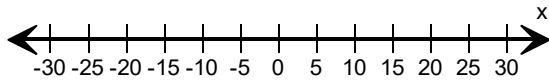
1) $x \leq 24$



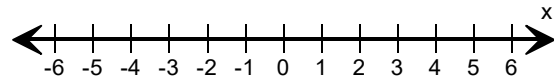
2) $x > -12$



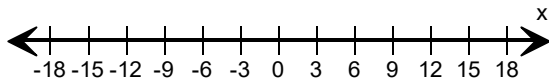
3) $x \leq 5$



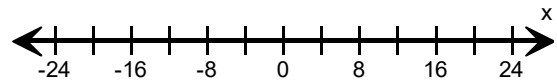
4) $x \geq 1$



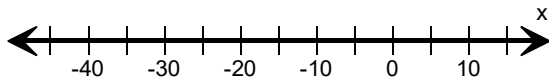
5) $x > 3$



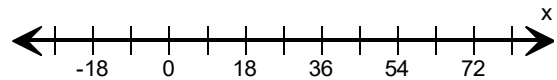
6) $x \leq 8$



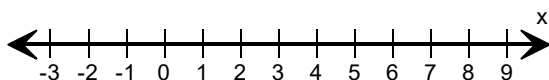
7) $x < -20$



8) $x > 27$



9) $x < 7$



10) $x \leq 16$

