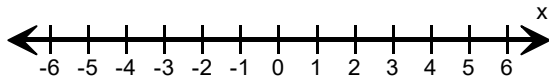
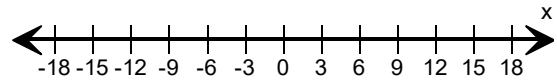


Graph the inequality.

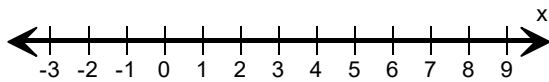
1) $x > -2$



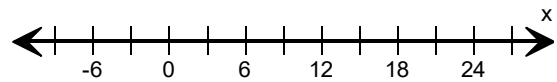
2) $x \leq -3$



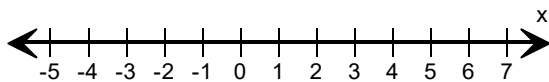
3) $x < 7$



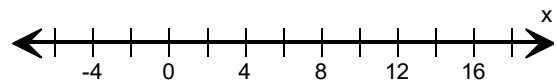
4) $x \geq 12$



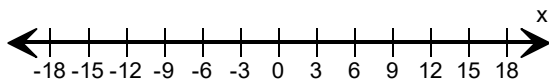
5) $x < 4$



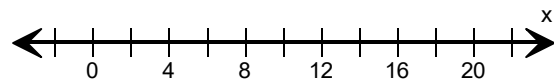
6) $x \leq 8$



7) $x \geq 3$



8) $x < 12$



9) $x \leq -24$



10) $x > 20$

