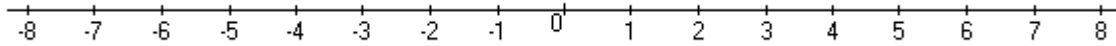
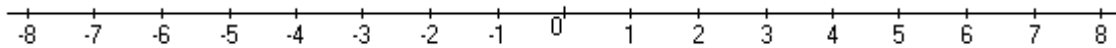


Graph the absolute value inequalities.

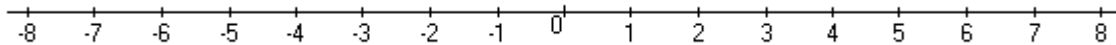
$$|n| > 5$$



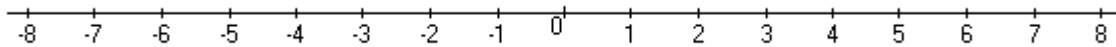
$$|k| \leq 4$$



$$|b| < 1$$



$$|x| \leq 3$$



$$|r| > 6$$

