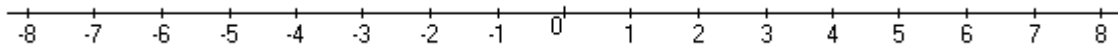
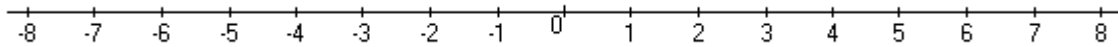


Graph the absolute value inequalities.

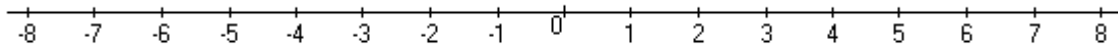
$$|a| \geq 2$$



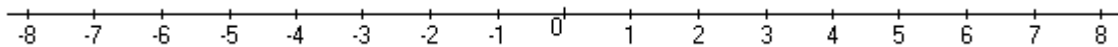
$$|q| > 1$$



$$|y| \leq 6$$



$$|t| < 5$$



$$|z| \leq 7$$

