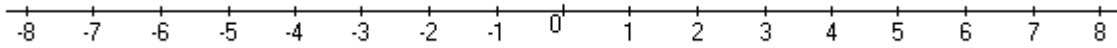
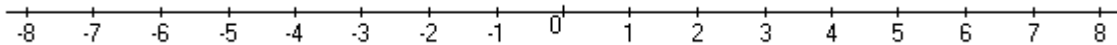


Graph the absolute value inequalities.

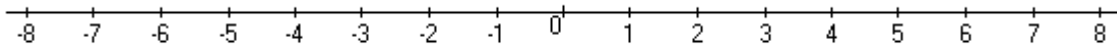
$$|x| > 3$$



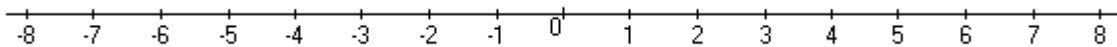
$$|a| > 2$$



$$|p| \leq 1$$



$$|m| \leq 4$$



$$|x| > 0$$

