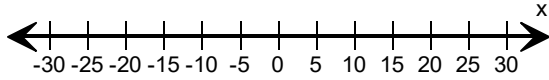
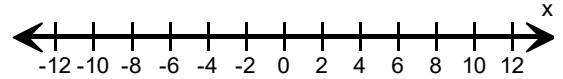


Graph the absolute value inequalities.

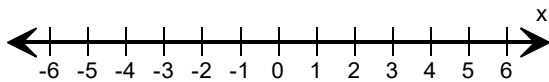
1)  $|x| \geq 5$



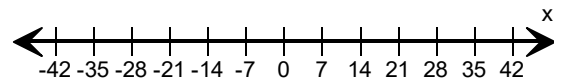
2)  $|x| < 2$



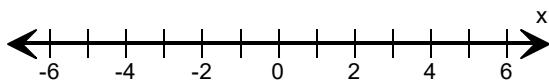
3)  $|x| \leq 1$



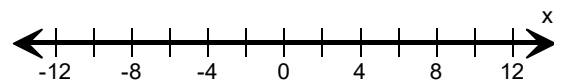
4)  $|x| < 7$



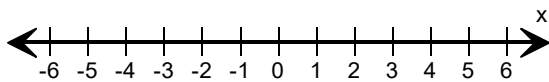
5)  $|x| > 2$



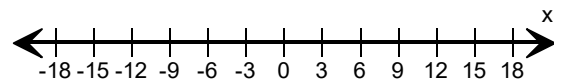
6)  $|x| \leq 4$



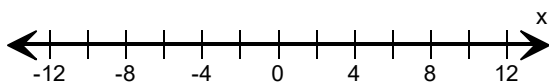
7)  $\frac{|x|}{5} \leq 1$



8)  $|x| \geq 9$



9)  $|x| > 8$



10)  $|x| < 3$

