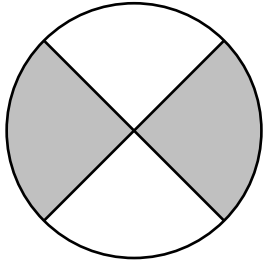


# Identifying Fractions

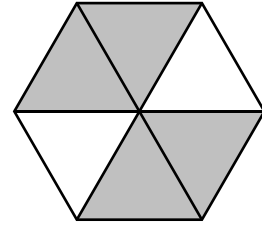
Write what fraction of each shape is shaded.



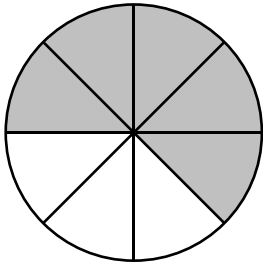
Fraction: \_\_\_\_\_



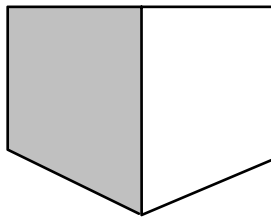
Fraction: \_\_\_\_\_



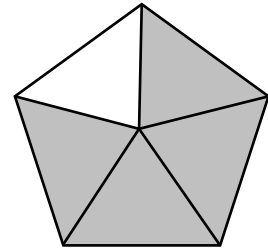
Fraction: \_\_\_\_\_



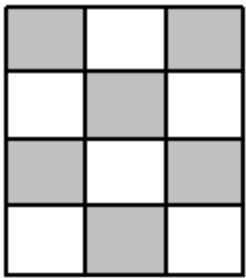
Fraction: \_\_\_\_\_



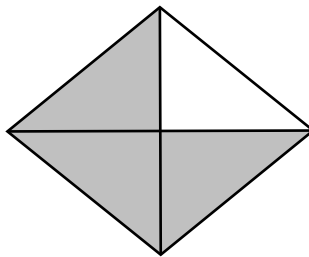
Fraction: \_\_\_\_\_



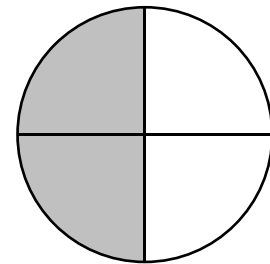
Fraction: \_\_\_\_\_



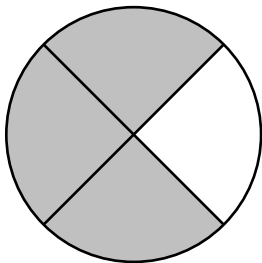
Fraction: \_\_\_\_\_



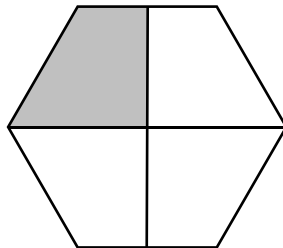
Fraction: \_\_\_\_\_




Fraction: \_\_\_\_\_



Fraction: \_\_\_\_\_



Fraction: \_\_\_\_\_



Fraction: \_\_\_\_\_