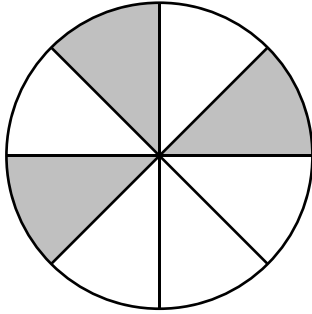


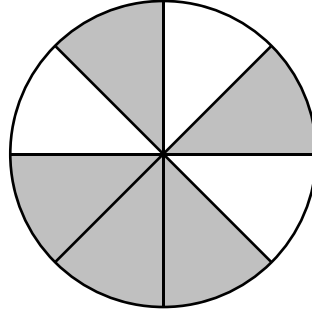
Identifying Fractions

Observe each pie model and write the fraction of the shaded and unshaded portions.



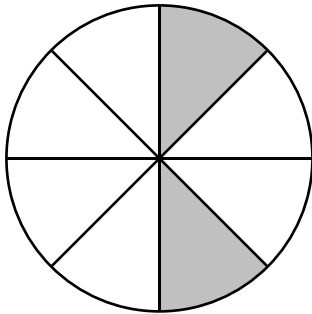
Shaded Part = _____

Unshaded Part = _____



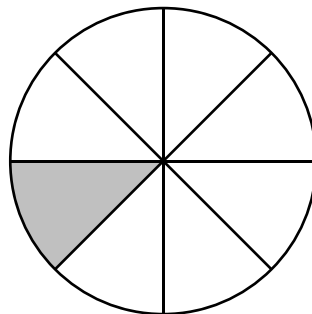
Shaded Part = _____

Unshaded Part = _____



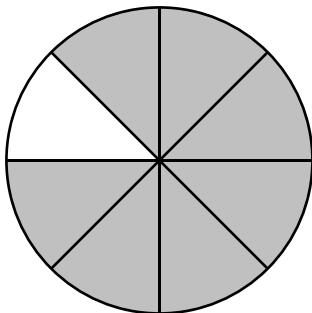
Shaded Part = _____

Unshaded Part = _____



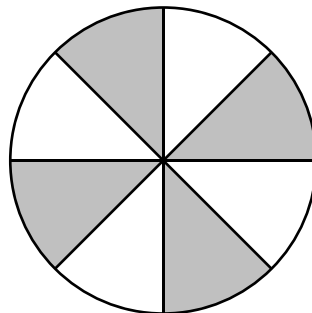
Shaded Part = _____

Unshaded Part = _____



Shaded Part = _____

Unshaded Part = _____



Shaded Part = _____

Unshaded Part = _____