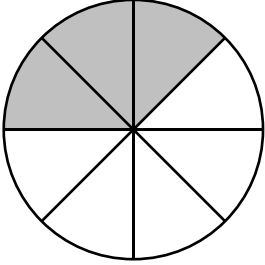
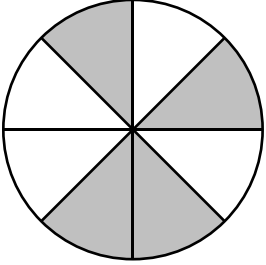
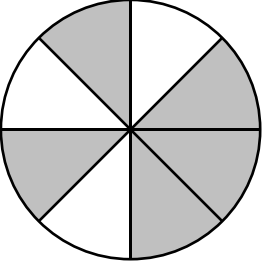
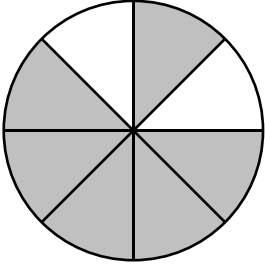
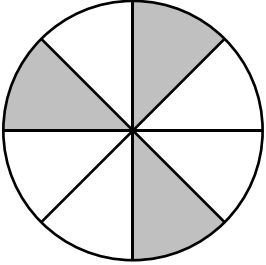
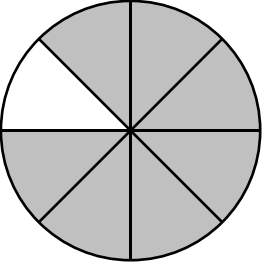
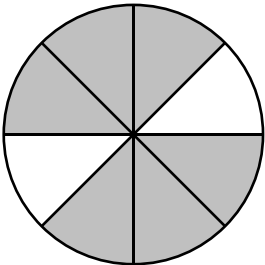
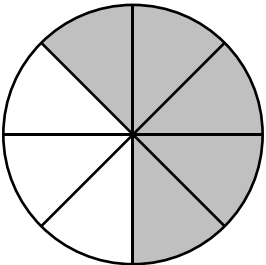
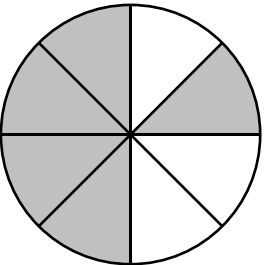
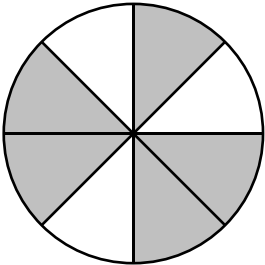
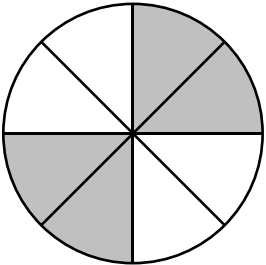
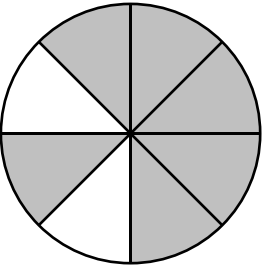


Identifying Fractions

Mary make pizzas with two toppings, pepperoni and mushroom. Shaded parts are pepperonis and the rest are mushrooms. What fractions are pepperonis or mushrooms?

		
Pepperoni part = _____	Mushroom part = _____	Pepperoni part = _____
		
Pepperoni part = _____	Mushroom part = _____	Pepperoni part = _____
		
Pepperoni part = _____	Mushroom part = _____	Pepperoni part = _____
		
Pepperoni part = _____	Mushroom part = _____	Pepperoni part = _____