


Fraction Activity

1. Divide the rhombus into 4 equal parts. Shade 3 parts.

What fraction of the rhombus is shaded? _____

What fraction of the rhombus is not shaded? _____



2. Divide the rectangle into 5 equal parts. Shade 2 parts.

What fraction of the rectangle is shaded? _____

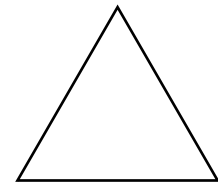
What fraction of the rectangle is not shaded? _____



3. Divide the triangle into 2 equal parts. Shade 1 part.

What fraction of the triangle is shaded? _____


What fraction of the triangle is not shaded? _____



4. Divide the circle into 8 equal parts. Shade 5 parts.

What fraction of the circle is shaded? _____

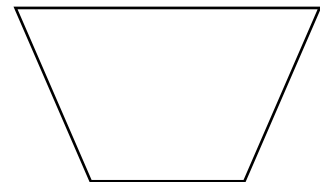
What fraction of the circle is not shaded? _____



5. Divide the trapezoid into 2 equal parts. Shade 1 part.

What fraction of the trapezoid is shaded? _____

What fraction of the trapezoid is not shaded? _____



6. Divide the hexagon into 6 equal parts. Shade 5 parts.

What fraction of the hexagon is shaded? _____

What fraction of the hexagon is not shaded? _____

