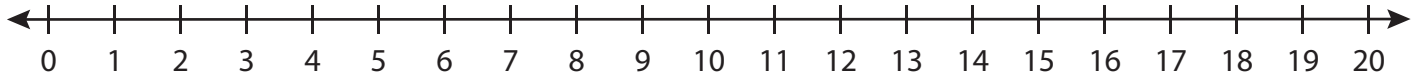


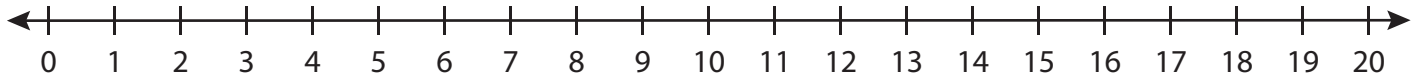
Division

Indicate hops on each number line and complete the division sentences.

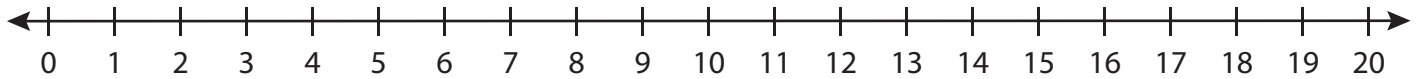
1) $18 \div 6 = \underline{\hspace{2cm}}$



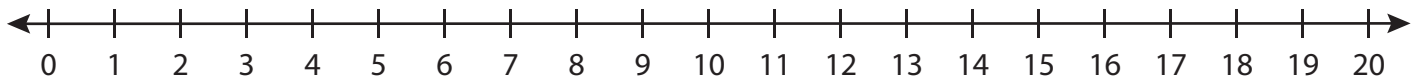
2) $12 \div 3 = \underline{\hspace{2cm}}$



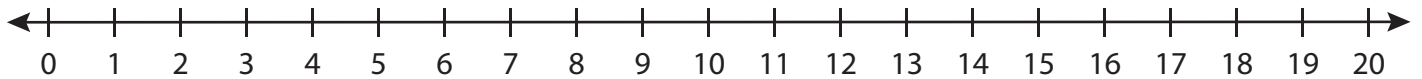
3) $8 \div 8 = \underline{\hspace{2cm}}$



4) $16 \div 2 = \underline{\hspace{2cm}}$



5) $20 \div 10 = \underline{\hspace{2cm}}$



6) $6 \div 1 = \underline{\hspace{2cm}}$

