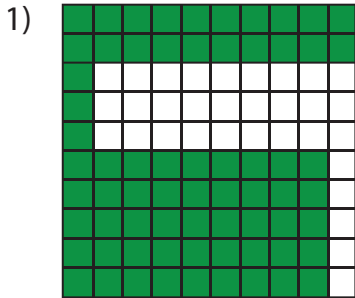


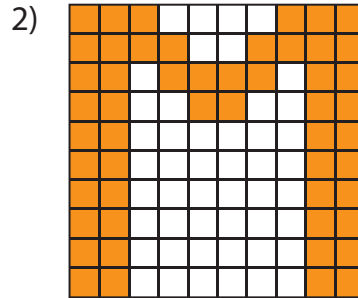
Estimation: Shaded Region

Estimate the number of shaded squares in each grid. Count and write the correct number.



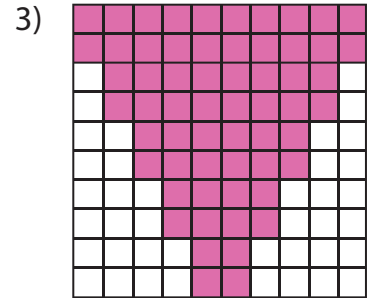
Estimated count: _____

Actual count: _____



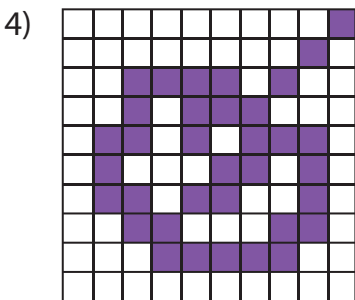
Estimated count: _____

Actual count: _____



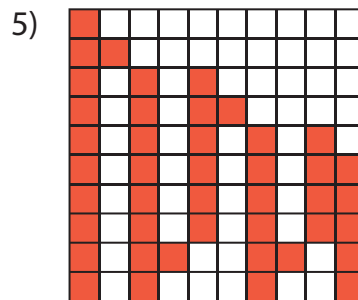
Estimated count: _____

Actual count: _____



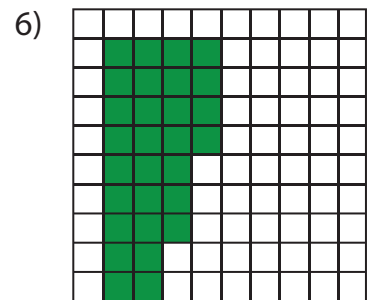
Estimated count: _____

Actual count: _____



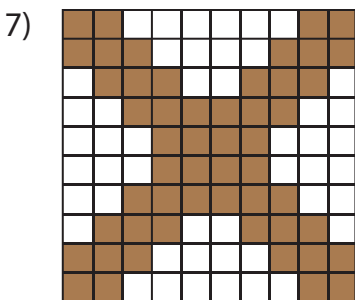
Estimated count: _____

Actual count: _____



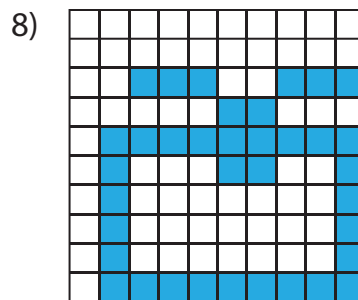
Estimated count: _____

Actual count: _____



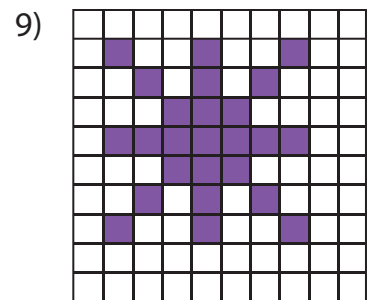
Estimated count: _____

Actual count: _____



Estimated count: _____

Actual count: _____



Estimated count: _____

Actual count: _____