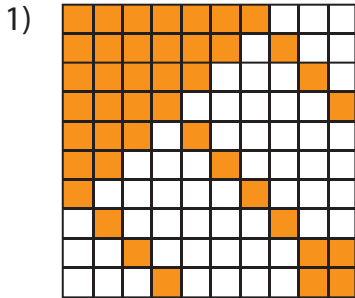


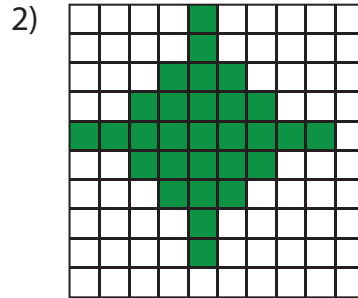
**Estimation: Shaded Region**

Estimate the number of shaded squares in each grid. Count and write the correct number.



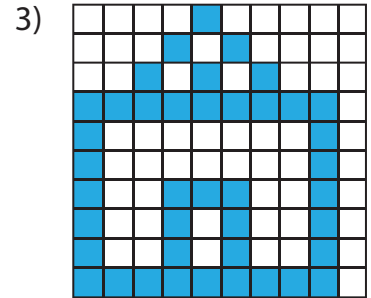
Estimated count: \_\_\_\_\_

Actual count: \_\_\_\_\_



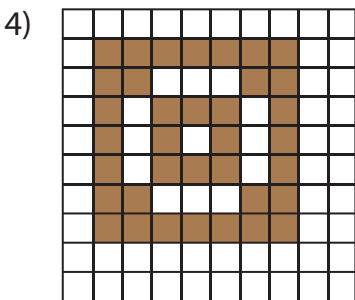
Estimated count: \_\_\_\_\_

Actual count: \_\_\_\_\_



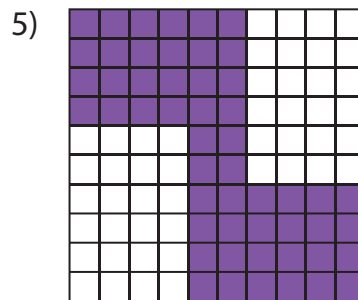
Estimated count: \_\_\_\_\_

Actual count: \_\_\_\_\_



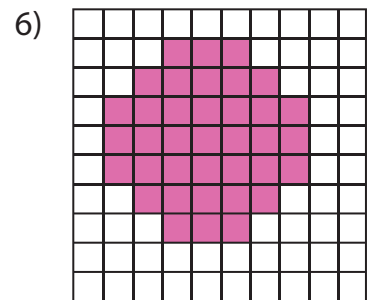
Estimated count: \_\_\_\_\_

Actual count: \_\_\_\_\_



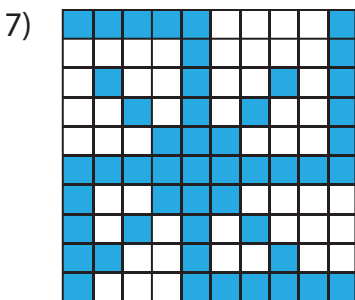
Estimated count: \_\_\_\_\_

Actual count: \_\_\_\_\_



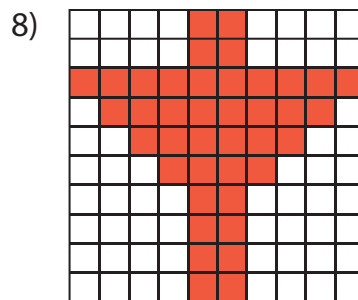
Estimated count: \_\_\_\_\_

Actual count: \_\_\_\_\_



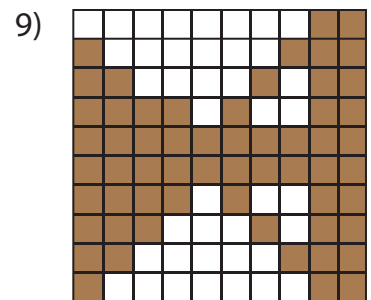
Estimated count: \_\_\_\_\_

Actual count: \_\_\_\_\_



Estimated count: \_\_\_\_\_

Actual count: \_\_\_\_\_



Estimated count: \_\_\_\_\_

Actual count: \_\_\_\_\_