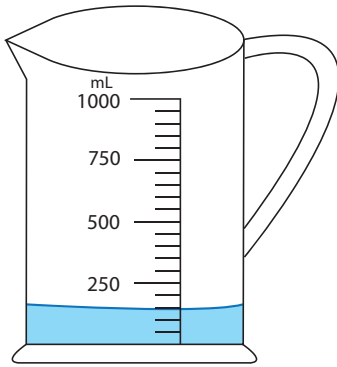


Reading Measuring Jugs

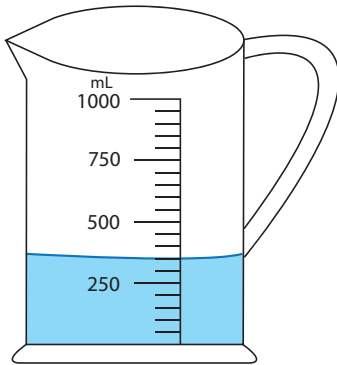
1)



How much water is required to fill the jug up to 700 mL?

\_\_\_\_\_ mL

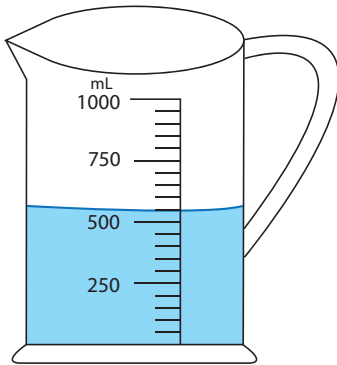
2)



If you add 350 mL of water to the jug, what would be the new reading?

\_\_\_\_\_ mL

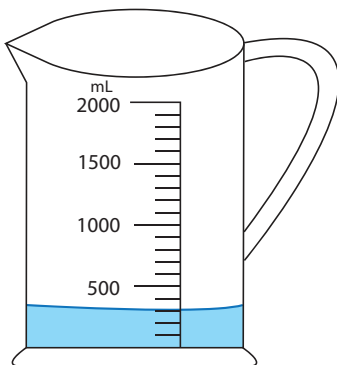
3)



How much water should you pour out from the jug to drop down the water level to 100 mL?

\_\_\_\_\_ mL

4)



How much water is required to fill the jug up to 500 mL?

\_\_\_\_\_ mL