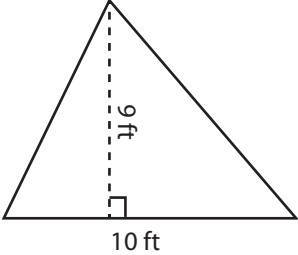
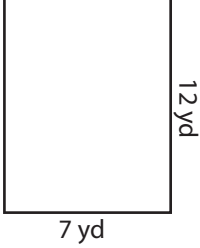
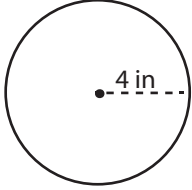


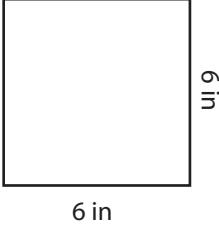
**Area - Mixed Shapes**

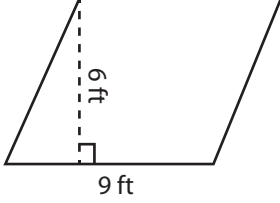
Find the area of each figure.

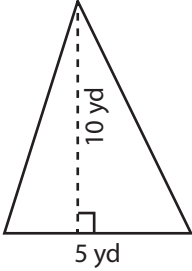
- 1) 

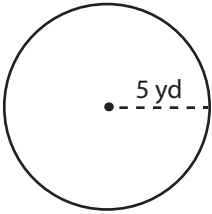
Area = \_\_\_\_\_
- 2) 

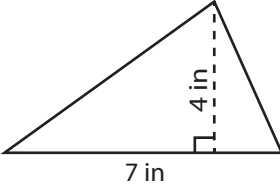
Area = \_\_\_\_\_
- 3) 

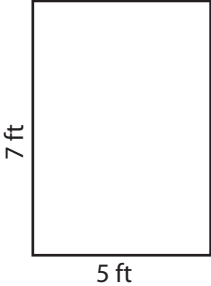
Area = \_\_\_\_\_
- 4) 

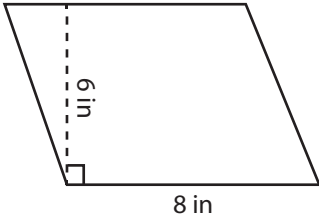
Area = \_\_\_\_\_
- 5) 

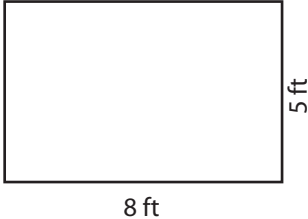
Area = \_\_\_\_\_
- 6) 

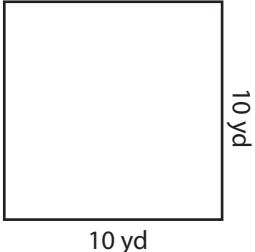
Area = \_\_\_\_\_
- 7) 

Area = \_\_\_\_\_
- 8) 

Area = \_\_\_\_\_
- 9) 

Area = \_\_\_\_\_
- 10) 

Area = \_\_\_\_\_
- 11) 

Area = \_\_\_\_\_
- 12) 

Area = \_\_\_\_\_