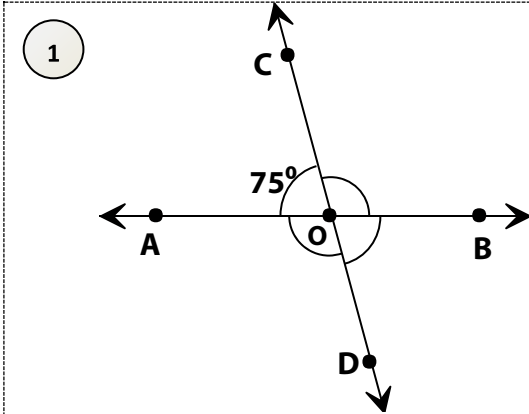
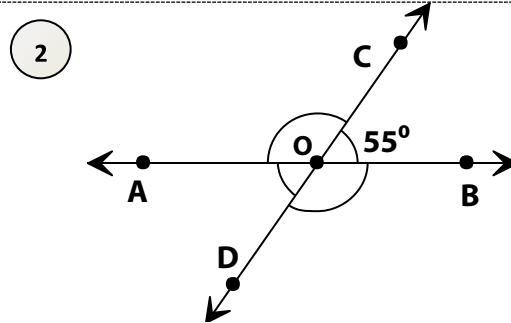


Vertical Angles

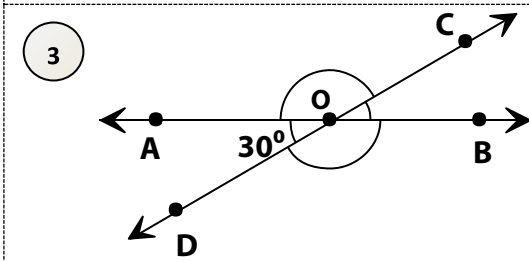
Find the unknown angles.



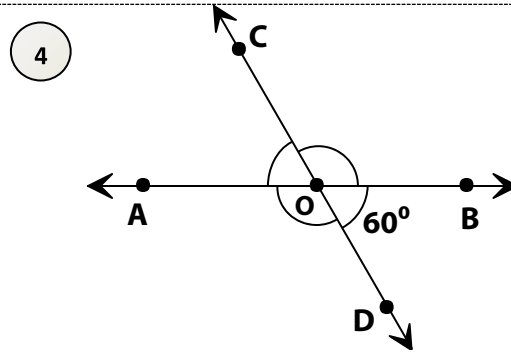
$\angle AOD =$ $\angle COB =$
 $\angle BOD =$



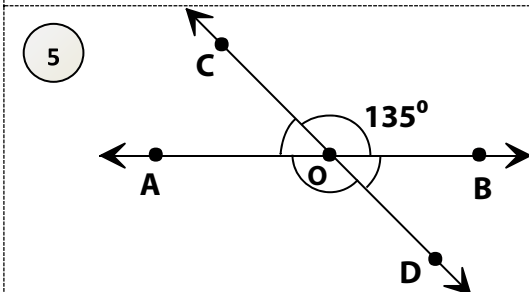
$\angle AOD =$ $\angle BOD =$
 $\angle COA =$



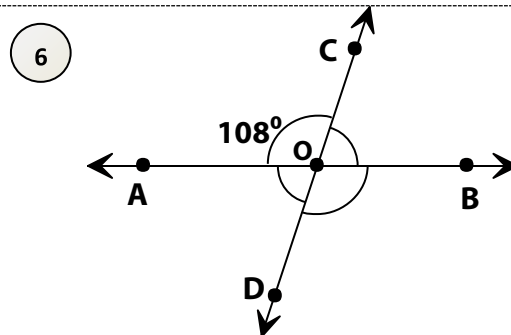
$\angle BOD =$ $\angle COB =$
 $\angle COA =$



$\angle AOD =$ $\angle COB =$
 $\angle COA =$



$\angle AOC =$ $\angle AOD =$
 $\angle BOD =$



$\angle BOD =$ $\angle AOD =$
 $\angle BOC =$