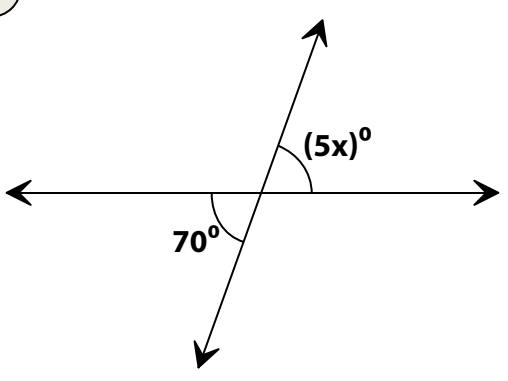
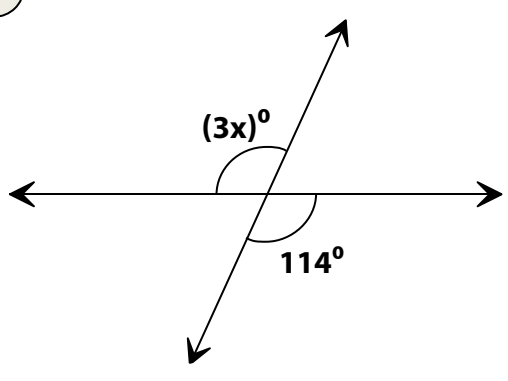
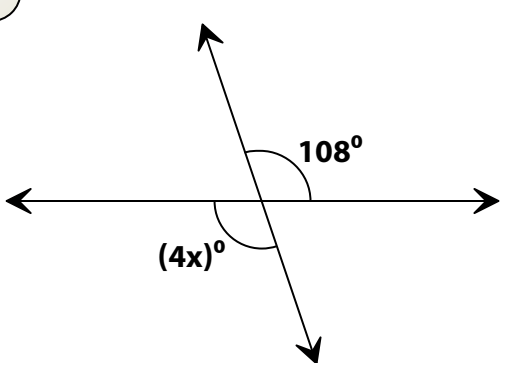
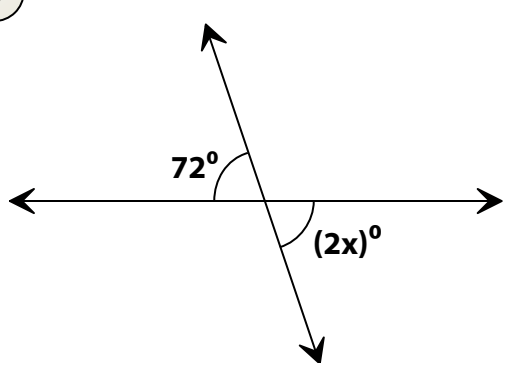
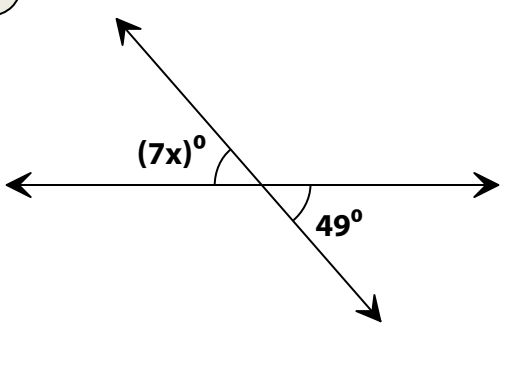
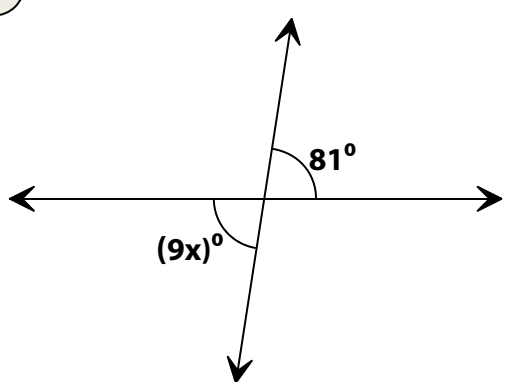


Vertical Angles

Find the value of x .

<p style="text-align: center;">1</p>  <p style="text-align: center;">$x =$</p>	<p style="text-align: center;">2</p>  <p style="text-align: center;">$x =$</p>
<p style="text-align: center;">3</p>  <p style="text-align: center;">$x =$</p>	<p style="text-align: center;">4</p>  <p style="text-align: center;">$x =$</p>
<p style="text-align: center;">5</p>  <p style="text-align: center;">$x =$</p>	<p style="text-align: center;">6</p>  <p style="text-align: center;">$x =$</p>