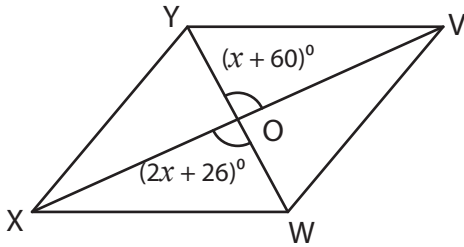


Parallelogram - Angles

Find the measure of the indicated angle in each parallelogram.

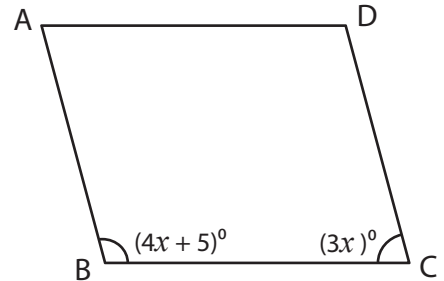
1)



$x =$ _____

$m\angle VOY =$ _____

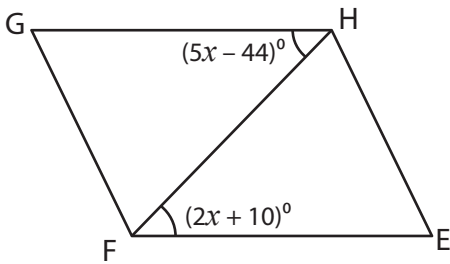
2)



$x =$ _____

$m\angle C =$ _____

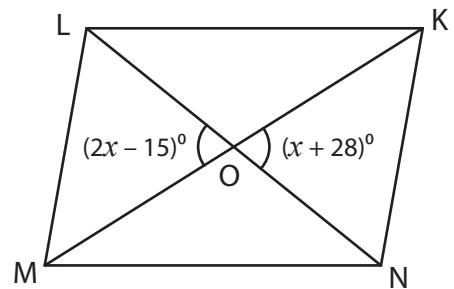
3)



$x =$ _____

$m\angle FHG =$ _____

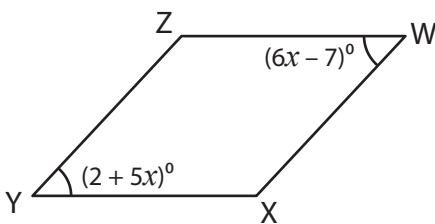
4)



$x =$ _____

$m\angle KOL =$ _____

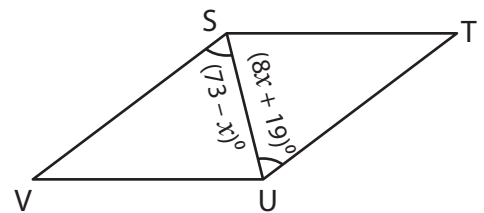
5)



$x =$ _____

$m\angle W =$ _____

6)



$x =$ _____

$m\angle VSU =$ _____