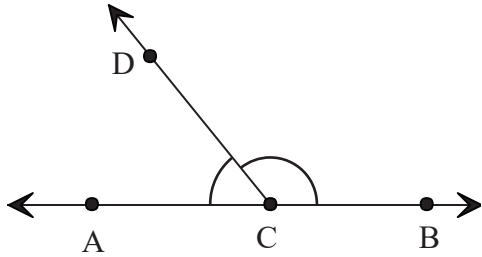


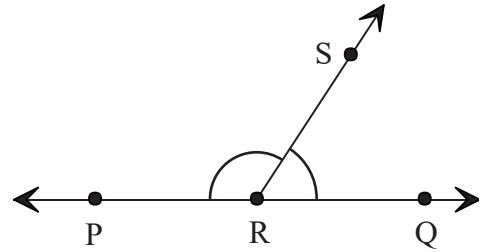
Parts of an Angle

Name the vertex and arms that form each angle.



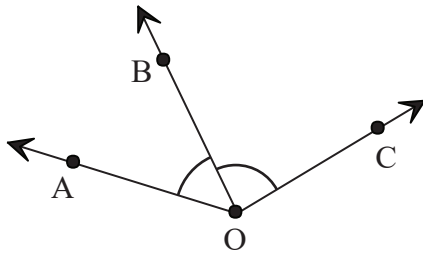
Angle: $\angle ACD$

Vertex: _____ Arms: _____



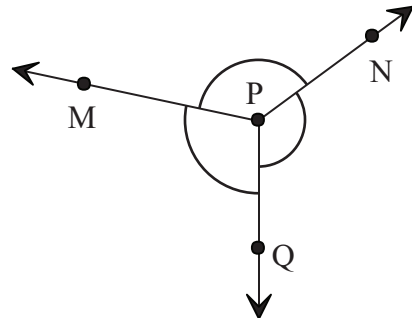
Angle: $\angle SRQ$

Vertex: _____ Arms: _____



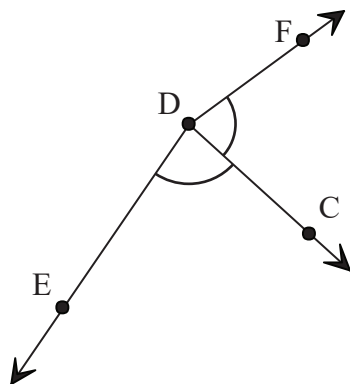
Angle: $\angle BOC$

Vertex: _____ Arms: _____



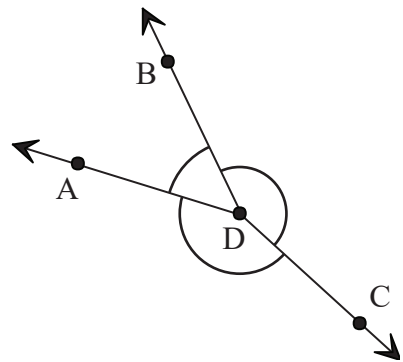
Angle: $\angle MPQ$

Vertex: _____ Arms: _____



Angle: $\angle CDF$

Vertex: _____ Arms: _____



Angle: $\angle ADC$

Vertex: _____ Arms: _____