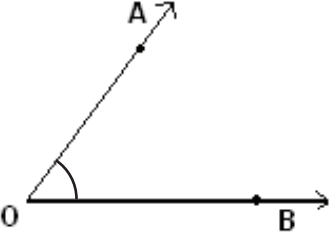
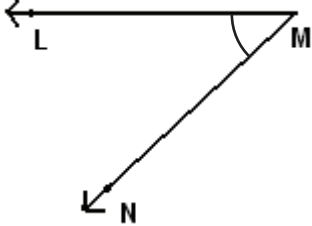
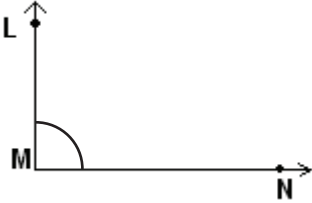
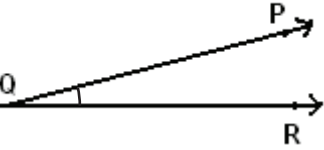
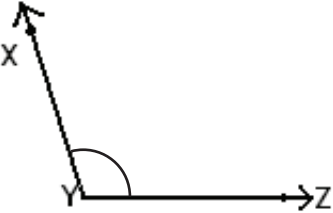
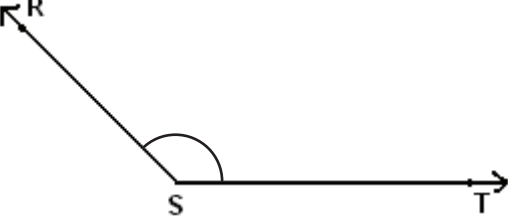
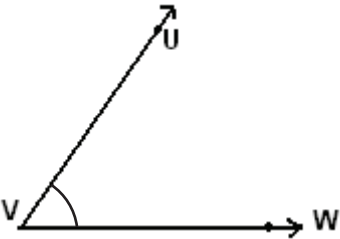
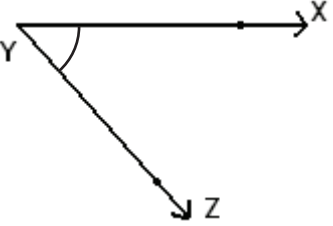


**Parts of an Angle**

Name the vertex and arms that form each angle.

 <p>Vertex: _____ Arms: _____</p>	 <p>Vertex: _____ Arms: _____</p>
 <p>Vertex: _____ Arms: _____</p>	 <p>Vertex: _____ Arms: _____</p>
 <p>Vertex: _____ Arms: _____</p>	 <p>Vertex: _____ Arms: _____</p>
 <p>Vertex: _____ Arms: _____</p>	 <p>Vertex: _____ Arms: _____</p>