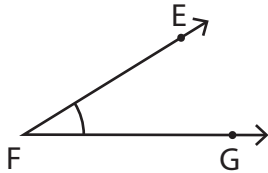


Parts of an Angle

Name the vertex and arms that form each angle.

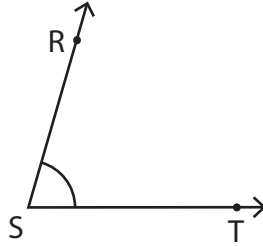
1)



Vertex: _____

Arms: _____

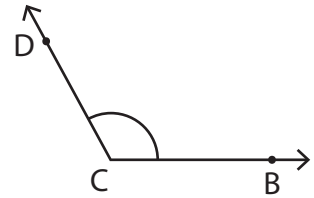
2)



Vertex: _____

Arms: _____

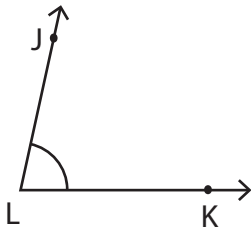
3)



Vertex: _____

Arms: _____

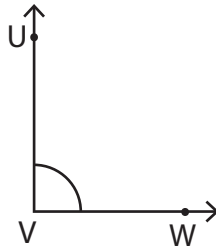
4)



Vertex: _____

Arms: _____

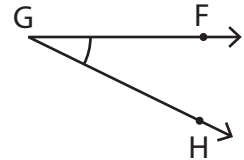
5)



Vertex: _____

Arms: _____

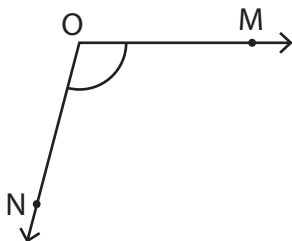
6)



Vertex: _____

Arms: _____

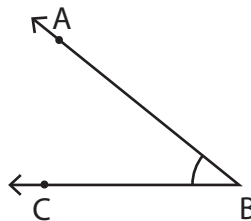
7)



Vertex: _____

Arms: _____

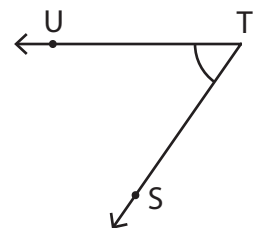
8)



Vertex: _____

Arms: _____

9)



Vertex: _____

Arms: _____