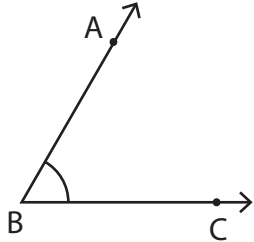


**Parts of an Angle**

Name the vertex and arms that form each angle.

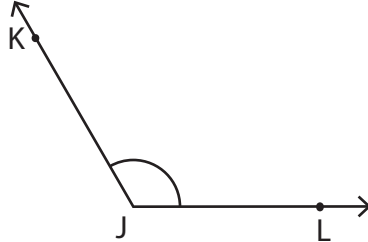
1)



Vertex: \_\_\_\_\_

Arms: \_\_\_\_\_

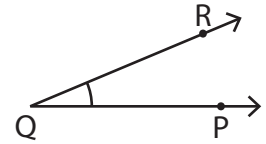
2)



Vertex: \_\_\_\_\_

Arms: \_\_\_\_\_

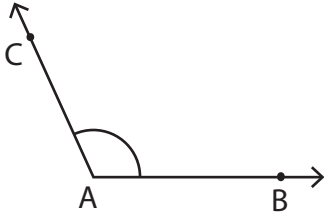
3)



Vertex: \_\_\_\_\_

Arms: \_\_\_\_\_

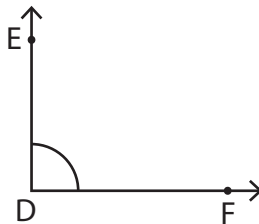
4)



Vertex: \_\_\_\_\_

Arms: \_\_\_\_\_

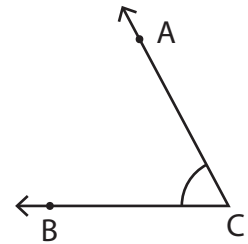
5)



Vertex: \_\_\_\_\_

Arms: \_\_\_\_\_

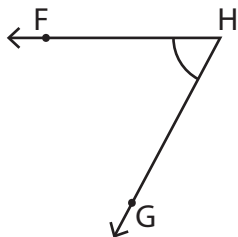
6)



Vertex: \_\_\_\_\_

Arms: \_\_\_\_\_

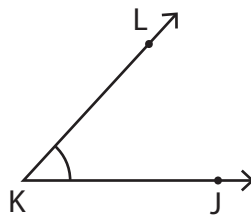
7)



Vertex: \_\_\_\_\_

Arms: \_\_\_\_\_

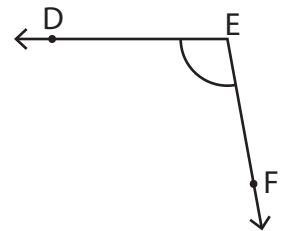
8)



Vertex: \_\_\_\_\_

Arms: \_\_\_\_\_

9)



Vertex: \_\_\_\_\_

Arms: \_\_\_\_\_