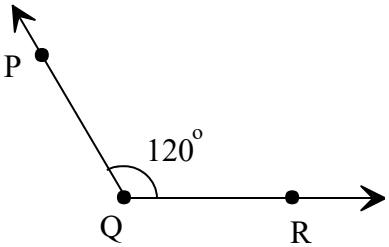
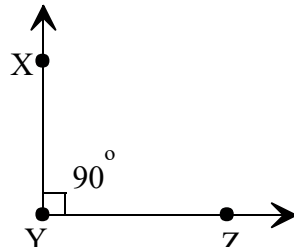
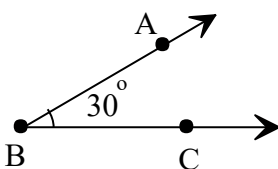
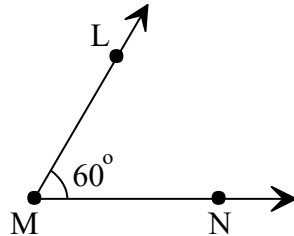
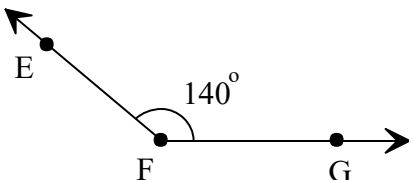
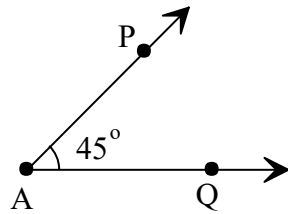
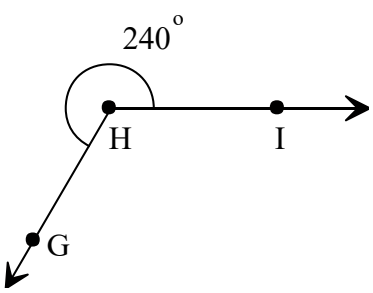
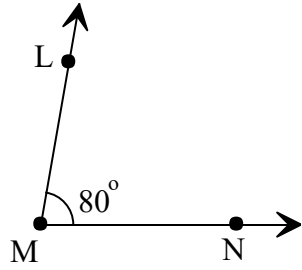


Angle Representation

Write the missing representation of each angle.

 <p><math>\angle PQR \cong \angle Q \cong \angle 120^\circ \cong</math> <input type="text"/></p>	 <p><math>\angle XYZ \cong \angle ZYX \cong \angle 90^\circ \cong</math> <input type="text"/></p>
 <p><math>\angle B \cong \angle ABC \cong \angle CBA \cong</math> <input type="text"/></p>	 <p><math>\angle 60^\circ \cong \angle NML \cong \angle LMN \cong</math> <input type="text"/></p>
 <p><math>\angle EFG \cong \angle 140^\circ \cong \angle F \cong</math> <input type="text"/></p>	 <p><math>\angle 45^\circ \cong \angle QAP \cong \angle A \cong</math> <input type="text"/></p>
 <p><math>\angle IHG \cong \angle GHI \cong \angle 240^\circ \cong</math> <input type="text"/></p>	 <p><math>\angle LMN \cong \angle 80^\circ \cong \angle NML \cong</math> <input type="text"/></p>