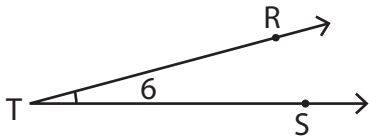


Angle Representation

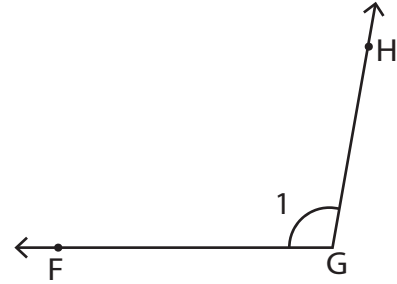
Write the missing representation of each angle.

1)



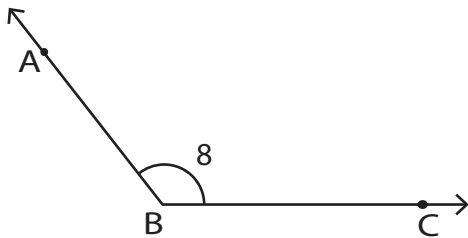
$\angle RTS \cong \angle STR \cong \angle T \cong \underline{\hspace{2cm}}$

2)



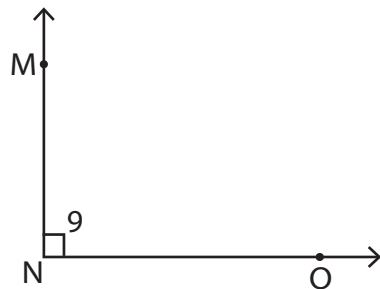
$\underline{\hspace{2cm}} \cong \angle HGF \cong \angle G \cong \angle 1$

3)



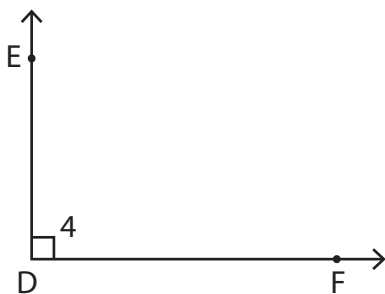
$\angle ABC \cong \angle CBA \cong \underline{\hspace{2cm}} \cong \angle 8$

4)



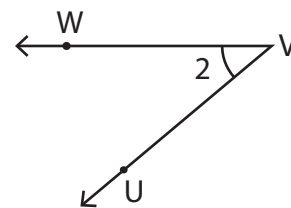
$\angle MNO \cong \underline{\hspace{2cm}} \cong \angle N \cong \angle 9$

5)



$\underline{\hspace{2cm}} \cong \angle FDE \cong \angle D \cong \angle 4$

6)



$\angle UVW \cong \angle WVU \cong \underline{\hspace{2cm}} \cong \angle 2$