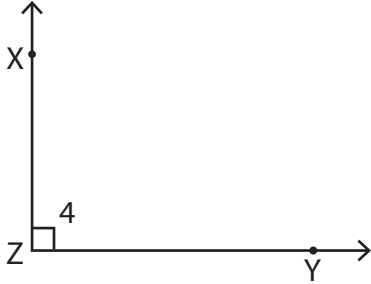


Angle Representation

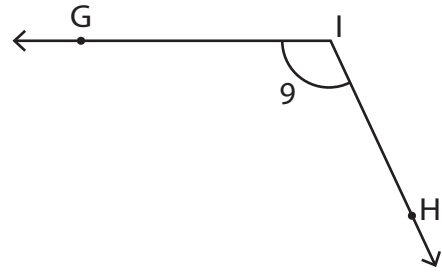
Write the missing representation of each angle.

1)



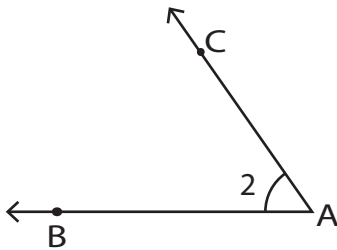
$\angle XZY \cong \underline{\hspace{1cm}} \cong \angle Z \cong \angle 4$

2)



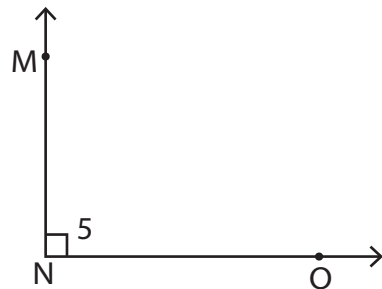
$\angle GIH \cong \angle HIG \cong \angle I \cong \underline{\hspace{1cm}}$

3)



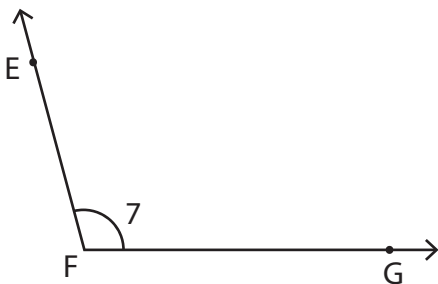
$\angle BAC \cong \angle CAB \cong \underline{\hspace{1cm}} \cong \angle 2$

4)



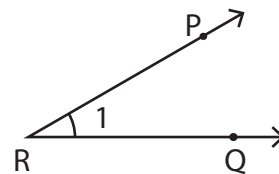
$\underline{\hspace{1cm}} \cong \angle ONM \cong \angle N \cong \angle 5$

5)



$\underline{\hspace{1cm}} \cong \angle GFE \cong \angle F \cong \angle 7$

6)



$\angle PRQ \cong \underline{\hspace{1cm}} \cong \angle R \cong \angle 1$