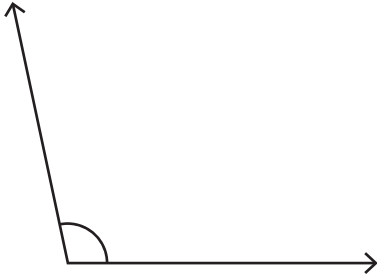


**Measuring Angles**

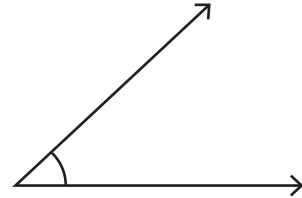
Measure each angle using a protractor.

1)



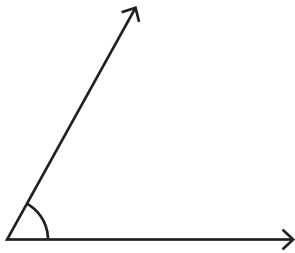
\_\_\_\_\_

2)



\_\_\_\_\_

3)



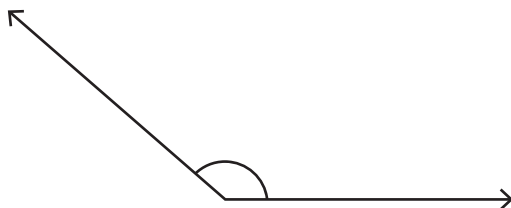
\_\_\_\_\_

4)



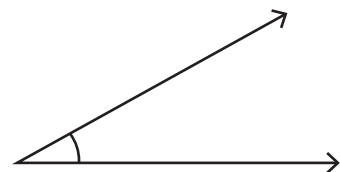
\_\_\_\_\_

5)



\_\_\_\_\_

6)



\_\_\_\_\_