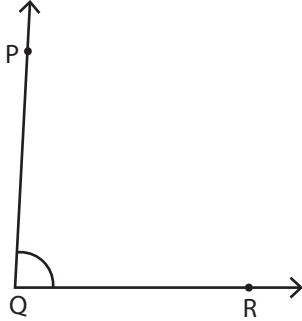


Measuring Angles

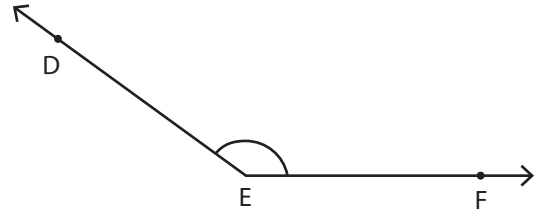
Measure each angle using a protractor.

1)



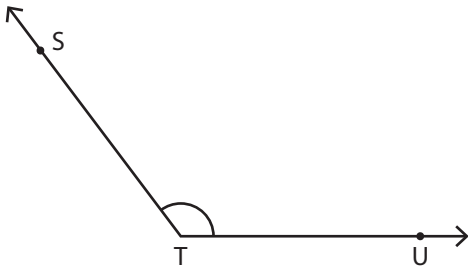
$m\angle PQR =$ _____

2)



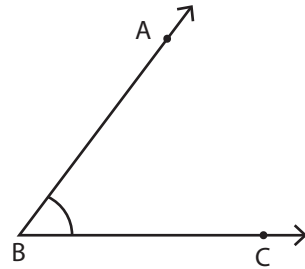
$m\angle DEF =$ _____

3)



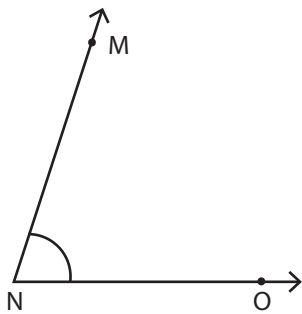
$m\angle STU =$ _____

4)



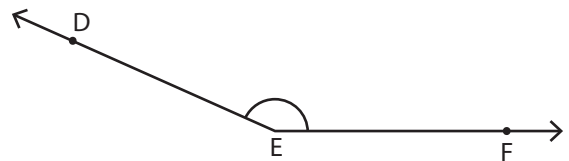
$m\angle ABC =$ _____

5)



$m\angle MNO =$ _____

6)



$m\angle DEF =$ _____