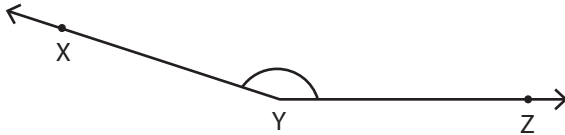


**Measuring Angles**

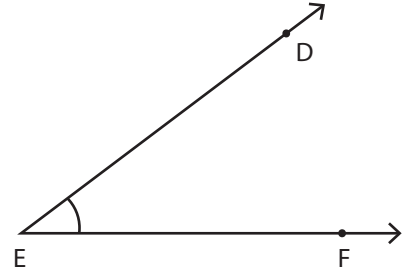
Measure each angle using a protractor.

1)



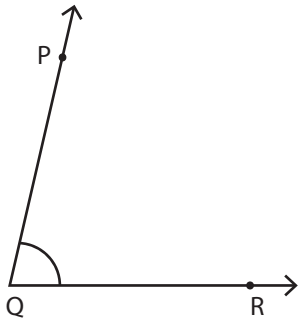
$m\angle XYZ = \underline{\hspace{2cm}}$

2)



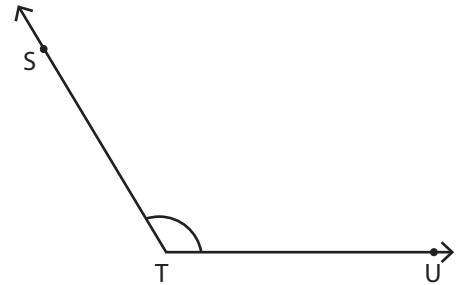
$m\angle DEF = \underline{\hspace{2cm}}$

3)



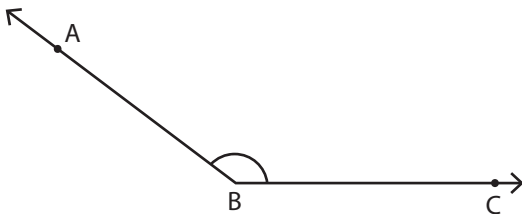
$m\angle PQR = \underline{\hspace{2cm}}$

4)



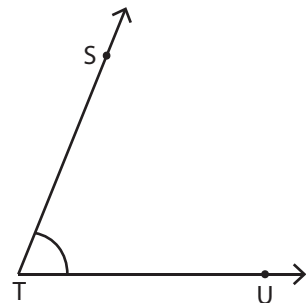
$m\angle STU = \underline{\hspace{2cm}}$

5)



$m\angle ABC = \underline{\hspace{2cm}}$

6)



$m\angle STU = \underline{\hspace{2cm}}$