

Measuring Angles

Measure each angle using a protractor.

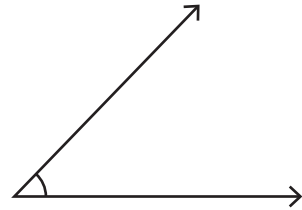
1)



Angle: _____

Type: _____

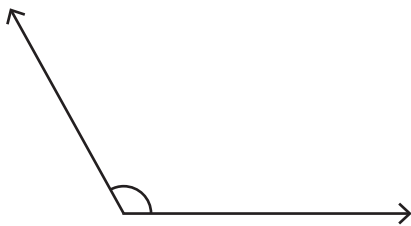
2)



Angle: _____

Type: _____

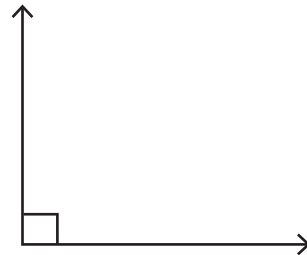
3)



Angle: _____

Type: _____

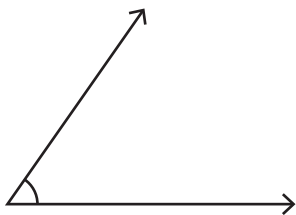
4)



Angle: _____

Type: _____

5)



Angle: _____

Type: _____

6)



Angle: _____

Type: _____