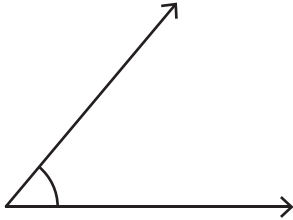


Choose the best estimation for the measure of each angle.

1)



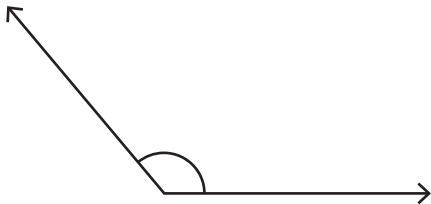
- a) 50° approx
- b) 70° approx
- c) 80° approx

2)



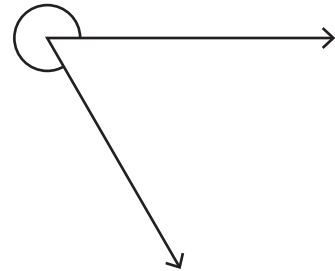
- a) 135° approx
- b) 155° approx
- c) 175° approx

3)



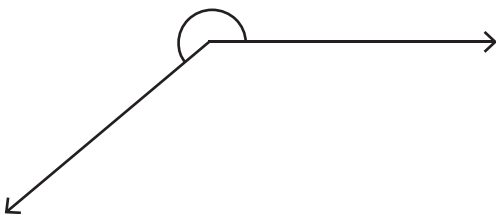
- a) 110° approx
- b) 130° approx
- c) 150° approx

4)



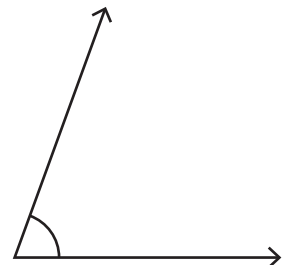
- a) 220° approx
- b) 235° approx
- c) 300° approx

5)



- a) 220° approx
- b) 270° approx
- c) 310° approx

6)



- a) 50° approx
- b) 70° approx
- c) 30° approx