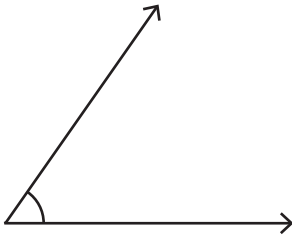


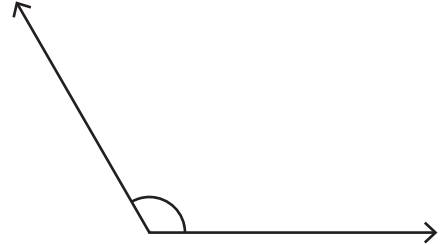
Choose the best estimation for the measure of each angle.

1)



- a)  $75^\circ$  approx
- b)  $55^\circ$  approx
- c)  $85^\circ$  approx

2)



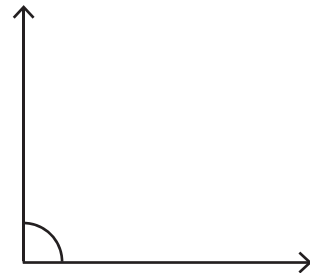
- a)  $120^\circ$  approx
- b)  $140^\circ$  approx
- c)  $150^\circ$  approx

3)



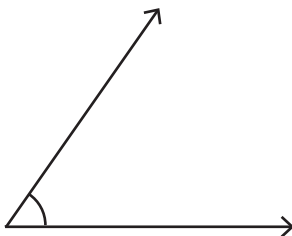
- a)  $160^\circ$  approx
- b)  $175^\circ$  approx
- c)  $180^\circ$  approx

4)



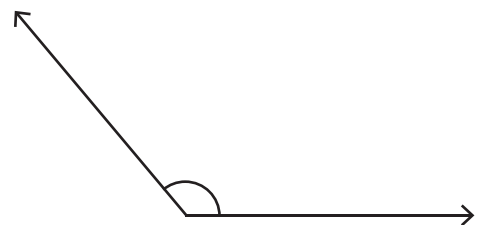
- a)  $70^\circ$  approx
- b)  $80^\circ$  approx
- c)  $90^\circ$  approx

5)



- a)  $75^\circ$  approx
- b)  $80^\circ$  approx
- c)  $55^\circ$  approx

6)



- a)  $130^\circ$  approx
- b)  $110^\circ$  approx
- c)  $160^\circ$  approx