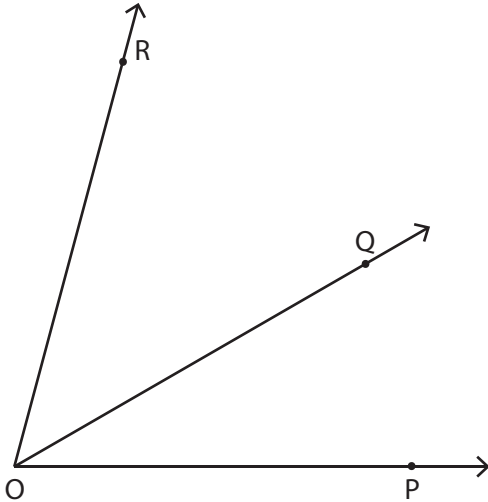


Find the measure of each indicated angle.

1)

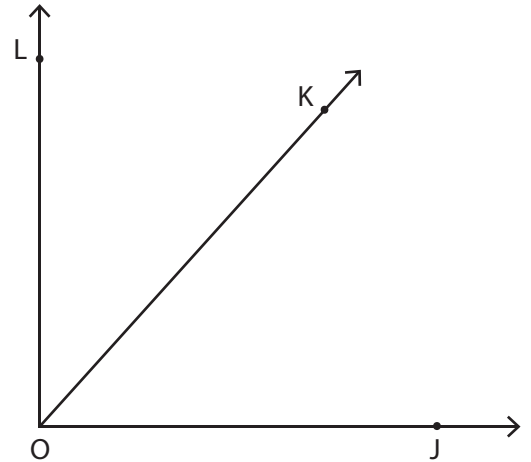


a) $\angle POQ = 30^\circ$

b) $\angle QOR = 45^\circ$

c) $\angle POR = \underline{\hspace{2cm}}$

2)

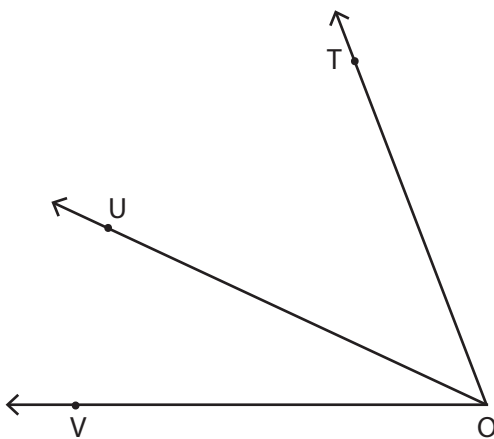


a) $\angle LOJ = 90^\circ$

b) $\angle LOK = 42^\circ$

c) $\angle KOJ = \underline{\hspace{2cm}}$

3)

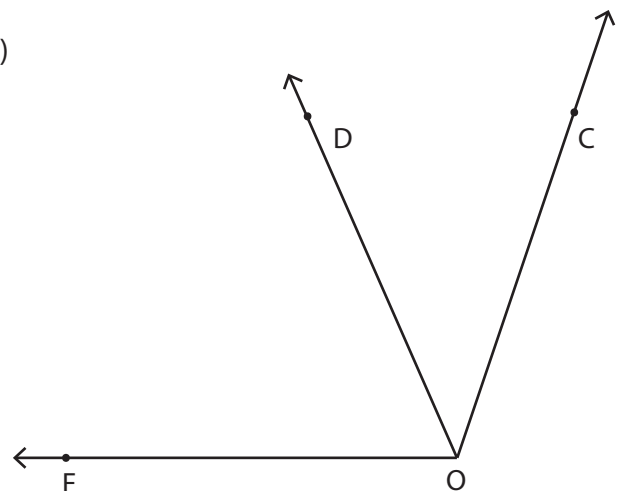


a) $\angle TOV = 69^\circ$

b) $\angle UOT = 44^\circ$

c) $\angle UOV = \underline{\hspace{2cm}}$

4)



a) $\angle COD = 45^\circ$

b) $\angle DOF = 65^\circ$

c) $\angle COF = \underline{\hspace{2cm}}$