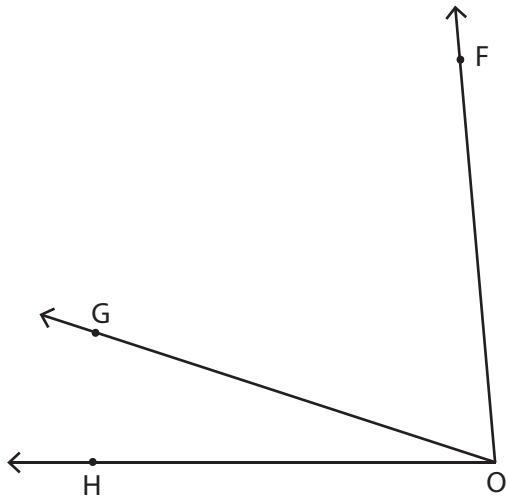


Find the measure of each indicated angle.

1)

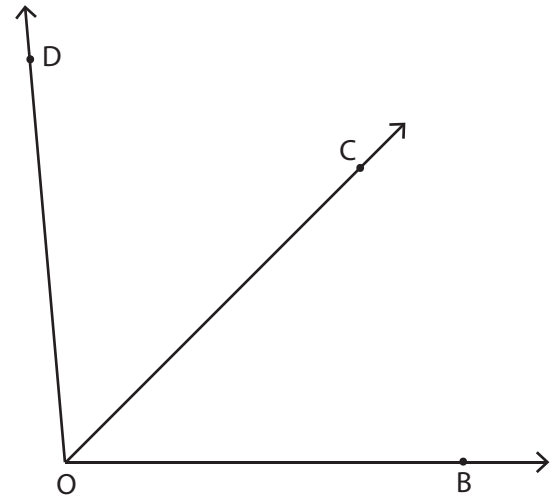


a) $\angle GOH = 20^\circ$

b) $\angle FOG = 65^\circ$

c) $\angle FOH = \underline{\hspace{2cm}}$

2)

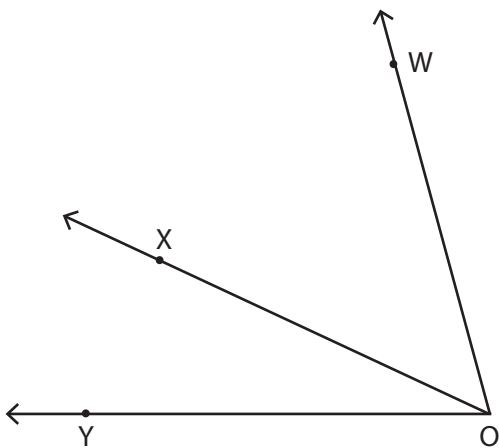


a) $\angle COB = 45^\circ$

b) $\angle DOC = 50^\circ$

c) $\angle DOB = \underline{\hspace{2cm}}$

3)

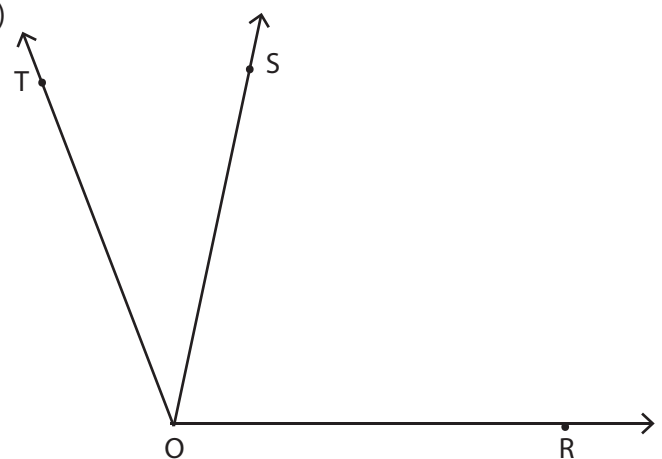


a) $\angle WOY = 75^\circ$

b) $\angle XOY = 25^\circ$

c) $\angle WOX = \underline{\hspace{2cm}}$

4)



a) $\angle TOR = 111^\circ$

b) $\angle TOS = 34^\circ$

c) $\angle SOR = \underline{\hspace{2cm}}$