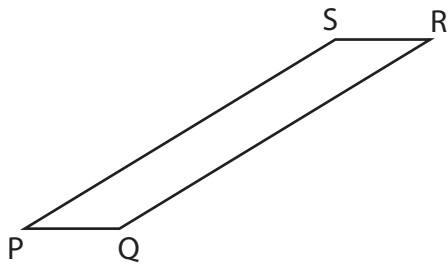


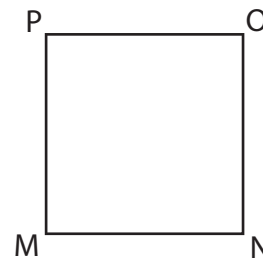
Classify each angle as acute, obtuse, or right.

1)



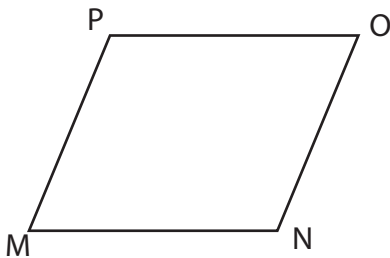
$\angle PQR$ is _____.

2)



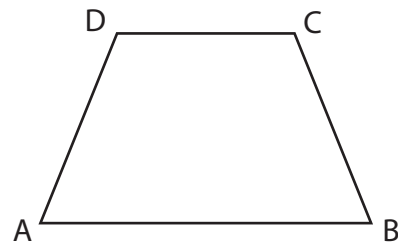
$\angle MNO$ is _____.

3)



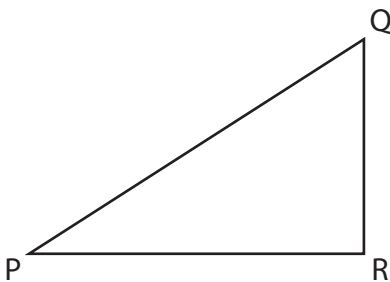
$\angle PMN$ is _____.

4)



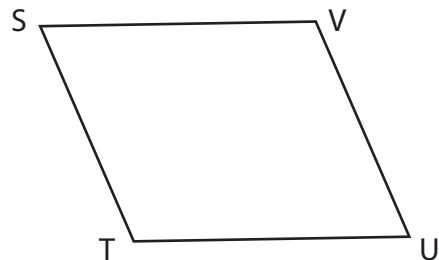
$\angle DCB$ is _____.

5)



$\angle PRQ$ is _____.

6)



$\angle STU$ is _____.