

Acute, Right, and Obtuse Angles

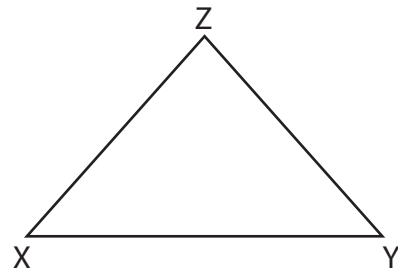
Classify each angle as acute, obtuse, or right.

1)



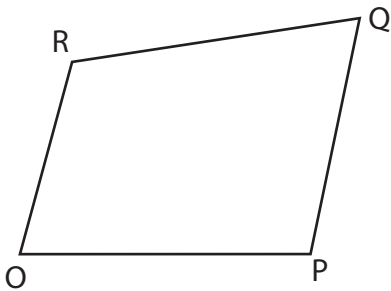
$\angle GHE$ is _____.

2)



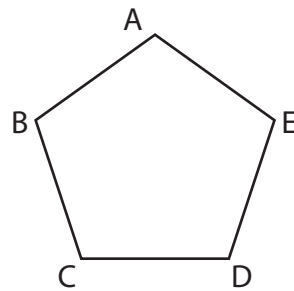
$\angle XYZ$ is _____.

3)



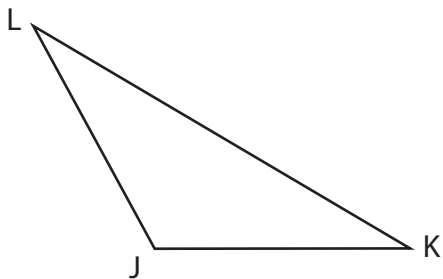
$\angle ROP$ is _____.

4)



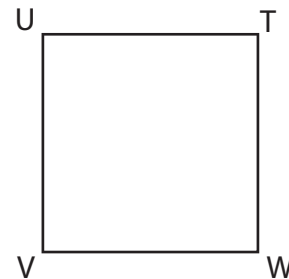
$\angle CDE$ is _____.

5)



$\angle LJK$ is _____.

6)



$\angle UVW$ is _____.