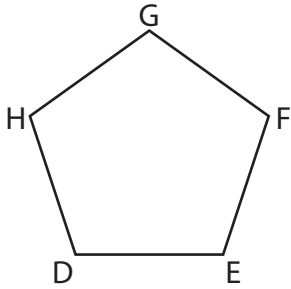


Acute, Right, and Obtuse Angles

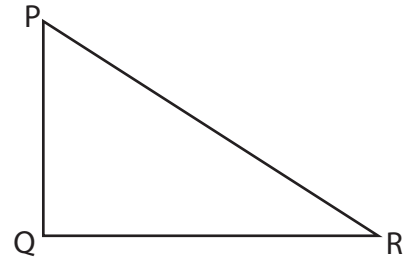
Classify each angle as acute, obtuse, or right.

1)



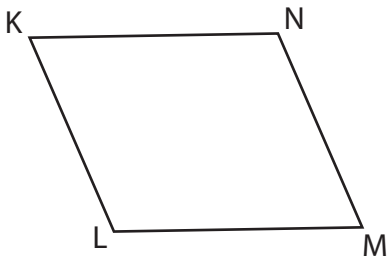
$\angle DEF$ is _____.

2)



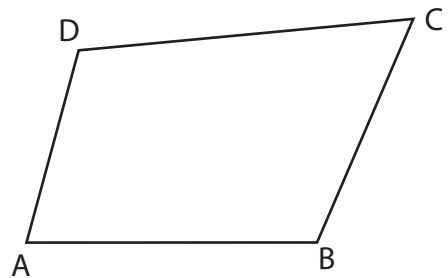
$\angle PQR$ is _____.

3)



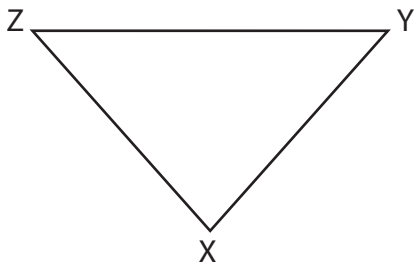
$\angle LMN$ is _____.

4)



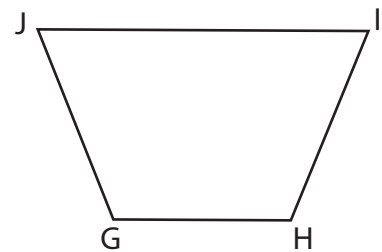
$\angle ABC$ is _____.

5)



$\angle XYZ$ is _____.

6)



$\angle GHI$ is _____.