

# Acute, Right, and Obtuse Angles

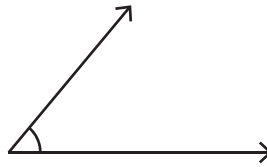
Classify each angle as acute, obtuse, or right.

1)



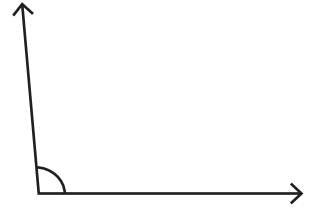
\_\_\_\_\_

2)



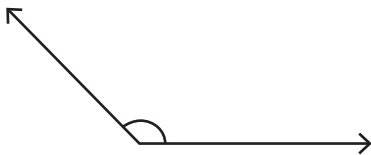
\_\_\_\_\_

3)



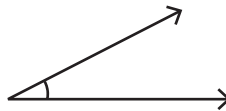
\_\_\_\_\_

4)



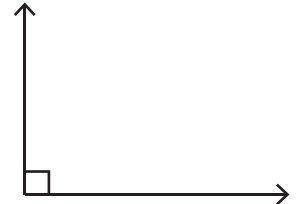
\_\_\_\_\_

5)



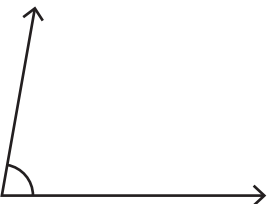
\_\_\_\_\_

6)



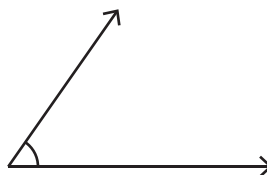
\_\_\_\_\_

7)



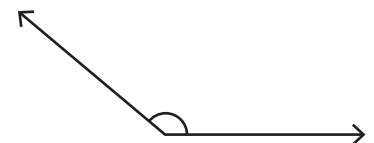
\_\_\_\_\_

8)



\_\_\_\_\_

9)



\_\_\_\_\_