

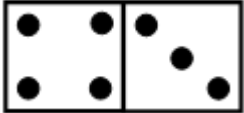

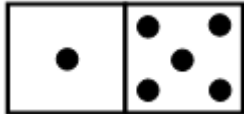
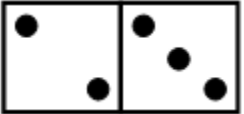
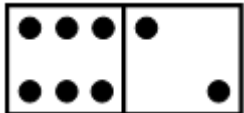
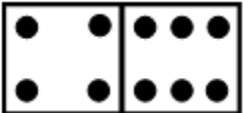

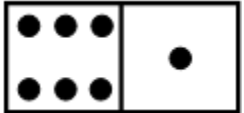
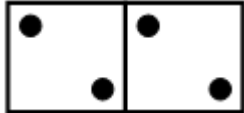
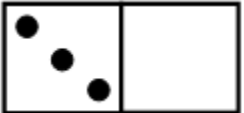
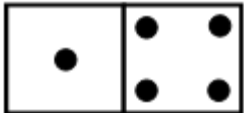

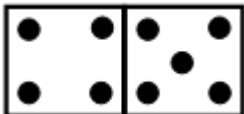
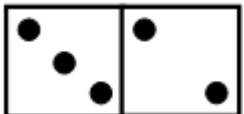
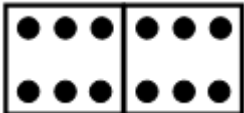
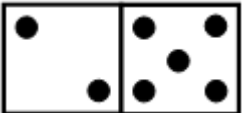
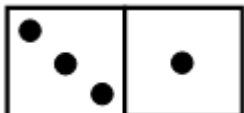
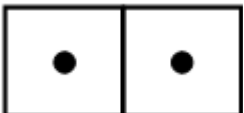


Domino Addition

Count the dots on the dominoes and write the total.

	$\square + \square = \square$		$\square + \square = \square$
	$\square + \square = \square$		$\square + \square = \square$
	$\square + \square = \square$		$\square + \square = \square$
	$\square + \square = \square$		$\square + \square = \square$
	$\square + \square = \square$		$\square + \square = \square$
	$\square + \square = \square$		$\square + \square = \square$
	$\square + \square = \square$		$\square + \square = \square$
	$\square + \square = \square$		$\square + \square = \square$
	$\square + \square = \square$		$\square + \square = \square$
	$\square + \square = \square$		$\square + \square = \square$