








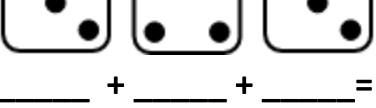
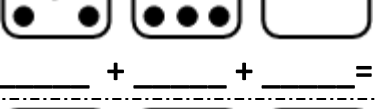
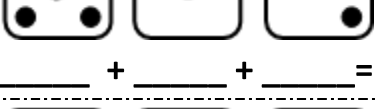

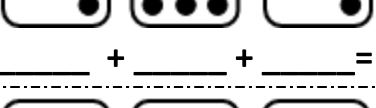








Addition Sentence using Dice

Count and add the dots on each pair of dice, and write the total.

<p>(1)  _____ + _____ + _____ = _____</p>	<p>(2)  _____ + _____ + _____ = _____</p>
<p>(3)  _____ + _____ + _____ = _____</p>	<p>(4)  _____ + _____ + _____ = _____</p>
<p>(5)  _____ + _____ + _____ = _____</p>	<p>(6)  _____ + _____ + _____ = _____</p>
<p>(7)  _____ + _____ + _____ = _____</p>	<p>(8)  _____ + _____ + _____ = _____</p>
<p>(9)  _____ + _____ + _____ = _____</p>	<p>(10)  _____ + _____ + _____ = _____</p>
<p>(11)  _____ + _____ + _____ = _____</p>	<p>(12)  _____ + _____ + _____ = _____</p>
<p>(13)  _____ + _____ + _____ = _____</p>	<p>(14)  _____ + _____ + _____ = _____</p>
<p>(15)  _____ + _____ + _____ = _____</p>	<p>(16)  _____ + _____ + _____ = _____</p>
<p>(17)  _____ + _____ + _____ = _____</p>	<p>(18)  _____ + _____ + _____ = _____</p>
<p>(19)  _____ + _____ + _____ = _____</p>	<p>(20)  _____ + _____ + _____ = _____</p>