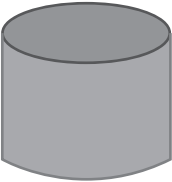

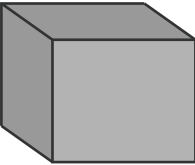

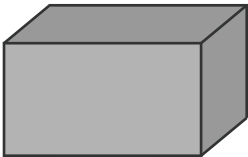


**Roll, Slide, and Stack**

What movements are possible? Complete the table.

Shape	Roll	Slide	Stack
	<p>Yes -----</p>	<p>Yes -----</p>	<p>Yes -----</p>
	<p>-----</p>	<p>-----</p>	<p>-----</p>
	<p>-----</p>	<p>-----</p>	<p>-----</p>
	<p>-----</p>	<p>-----</p>	<p>-----</p>
	<p>-----</p>	<p>-----</p>	<p>-----</p>