

**Solid Shapes and Objects**

Cone

Cylinder


Sphere

Pyramid


Rectangular prism

Cube

Write the name of the solid shape below each object.



\_\_\_\_\_




\_\_\_\_\_



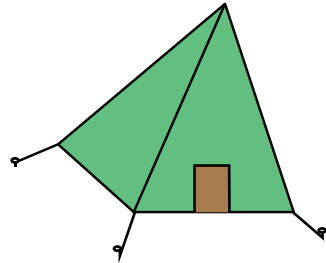
\_\_\_\_\_




\_\_\_\_\_



\_\_\_\_\_




\_\_\_\_\_



\_\_\_\_\_



\_\_\_\_\_



\_\_\_\_\_