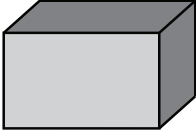
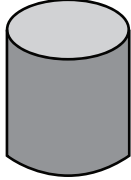
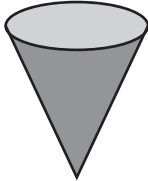
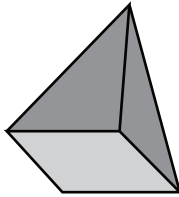

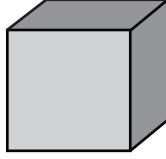
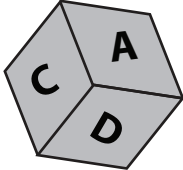
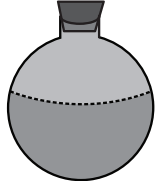

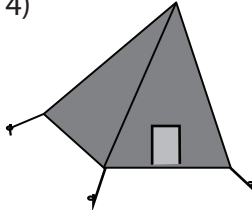

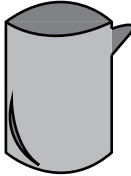


A) Choose the correct name of each shape.

<p>1)</p>  <p> <input type="checkbox"/> Rectangular prism  <input type="checkbox"/> Cone  <input type="checkbox"/> Cylinder         </p>	<p>2)</p>  <p> <input type="checkbox"/> Sphere  <input type="checkbox"/> Cylinder  <input type="checkbox"/> Cube         </p>
<p>3)</p>  <p> <input type="checkbox"/> Cube  <input type="checkbox"/> Pyramid  <input type="checkbox"/> Cone         </p>	<p>4)</p>  <p> <input type="checkbox"/> Pyramid  <input type="checkbox"/> Cube  <input type="checkbox"/> Rectangular prism         </p>
<p>5)</p>  <p> <input type="checkbox"/> Sphere  <input type="checkbox"/> Cylinder  <input type="checkbox"/> Cone         </p>	<p>6)</p>  <p> <input type="checkbox"/> Cone  <input type="checkbox"/> Cube  <input type="checkbox"/> Sphere         </p>

B) Choose the correct choice that best describes each object.

<p>1)</p>  <p> <input type="checkbox"/> Cone  <input type="checkbox"/> Cylinder  <input type="checkbox"/> Cube         </p>	<p>2)</p>  <p> <input type="checkbox"/> Cylinder  <input type="checkbox"/> Sphere  <input type="checkbox"/> Cone         </p>
<p>3)</p>  <p> <input type="checkbox"/> Rectangular prism  <input type="checkbox"/> Cube  <input type="checkbox"/> Pyramid         </p>	<p>4)</p>  <p> <input type="checkbox"/> Cone  <input type="checkbox"/> Pyramid  <input type="checkbox"/> Rectangular prism         </p>
<p>5)</p>  <p> <input type="checkbox"/> Cube  <input type="checkbox"/> Sphere  <input type="checkbox"/> Cone         </p>	<p>6)</p>  <p> <input type="checkbox"/> Cylinder  <input type="checkbox"/> Sphere  <input type="checkbox"/> Cone         </p>