
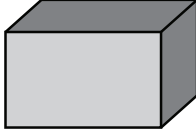

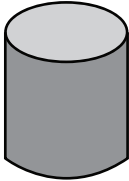
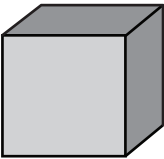
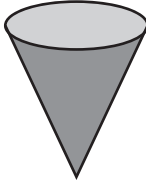
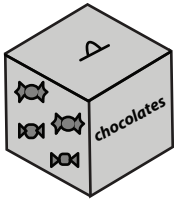
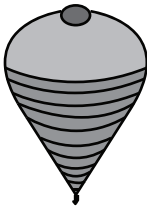

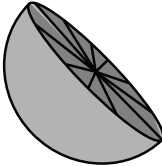
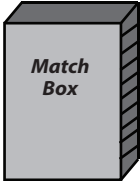
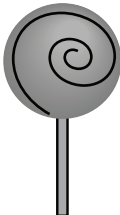


A) Choose the correct name of each shape.

<p>1)</p>  <p> <input type="checkbox"/> Sphere <input type="checkbox"/> Cylinder <input type="checkbox"/> Cone </p>	<p>2)</p>  <p> <input type="checkbox"/> Cylinder <input type="checkbox"/> Rectangular prism <input type="checkbox"/> Cube </p>
<p>3)</p>  <p> <input type="checkbox"/> Cone <input type="checkbox"/> Hemisphere <input type="checkbox"/> Sphere </p>	<p>4)</p>  <p> <input type="checkbox"/> Cylinder <input type="checkbox"/> Sphere <input type="checkbox"/> Rectangular prism </p>
<p>5)</p>  <p> <input type="checkbox"/> Sphere <input type="checkbox"/> Cylinder <input type="checkbox"/> Cube </p>	<p>6)</p>  <p> <input type="checkbox"/> Cube <input type="checkbox"/> Cone <input type="checkbox"/> Hemisphere </p>

B) Choose the correct choice that best describes each object.

<p>1)</p>  <p> <input type="checkbox"/> Rectangular prism <input type="checkbox"/> Cylinder <input type="checkbox"/> Cube </p>	<p>2)</p>  <p> <input type="checkbox"/> Sphere <input type="checkbox"/> Cone <input type="checkbox"/> Cube </p>
<p>3)</p>  <p> <input type="checkbox"/> Cylinder <input type="checkbox"/> Cube <input type="checkbox"/> Hemisphere </p>	<p>4)</p>  <p> <input type="checkbox"/> Cone <input type="checkbox"/> Sphere <input type="checkbox"/> Hemisphere </p>
<p>5)</p>  <p> <input type="checkbox"/> Cone <input type="checkbox"/> Rectangular prism <input type="checkbox"/> Cube </p>	<p>6)</p>  <p> <input type="checkbox"/> Sphere <input type="checkbox"/> Cylinder <input type="checkbox"/> Cone </p>