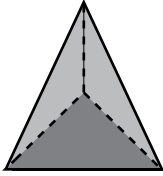


Naming Prisms and Pyramids - MCQ

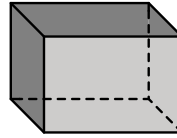
Choose the correct name of each shape.

1)



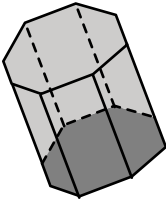
- Triangular pyramid
- Triangular prism
- Pentagonal prism

2)



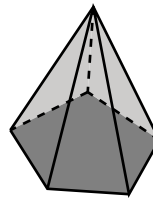
- Hexagonal prism
- Rectangular prism
- Octagonal pyramid

3)



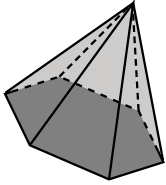
- Octagonal prism
- Octagonal pyramid
- Rectangular prism

4)



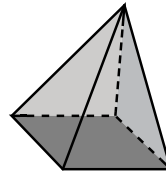
- Hexagonal pyramid
- Rectangular prism
- Pentagonal pyramid

5)



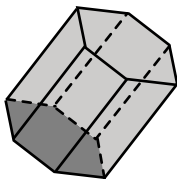
- Pentagonal prism
- Hexagonal pyramid
- Pentagonal prism

6)



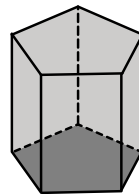
- Square pyramid
- Hexagonal prism
- Octagonal pyramid

7)



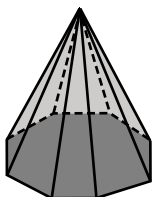
- Square pyramid
- Pentagonal prism
- Hexagonal prism

8)



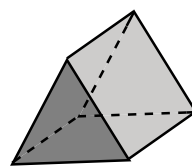
- Pentagonal prism
- Rectangular pyramid
- Hexagonal prism

9)



- Hexagonal prism
- Rectangular pyramid
- Octagonal pyramid

10)



- Rectangular prism
- Triangular prism
- Square pyramid