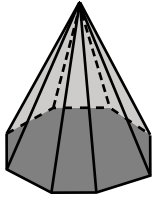


Naming Prisms and Pyramids - MCQ

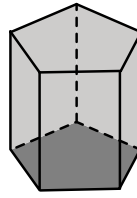
Choose the correct name of each shape.

1)



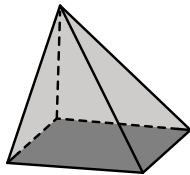
- Rectangular pyramid
- Octagonal pyramid
- Triangular prism

2)



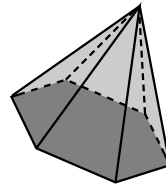
- Octagonal prism
- Hexagonal pyramid
- Pentagonal prism

3)



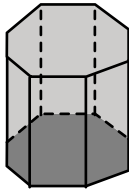
- Rectangular pyramid
- Pentagonal pyramid
- Octagonal prism

4)



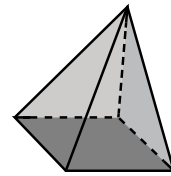
- Square pyramid
- Hexagonal pyramid
- Rectangular prism

5)



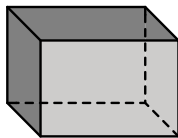
- Octagonal prism
- Rectangular pyramid
- Pentagonal prism

6)



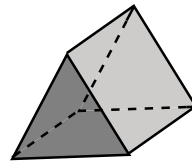
- Pentagonal pyramid
- Rectangular prism
- Square pyramid

7)



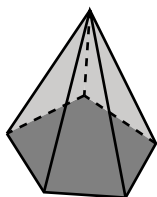
- Octagonal pyramid
- Rectangular prism
- Hexagonal pyramid

8)



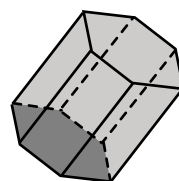
- Pentagonal prism
- Triangular pyramid
- Triangular prism

9)



- Pentagonal pyramid
- Square pyramid
- Hexagonal pyramid

10)



- Octagonal prism
- Hexagonal prism
- Rectangular pyramid