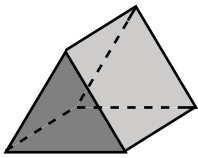


**Naming Prisms and Pyramids - MCQ**

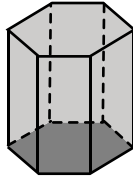
Choose the correct name of each shape.

1)



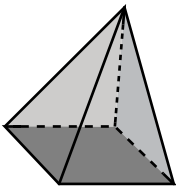
- Rectangular prism
- Triangular pyramid
- Triangular prism

2)



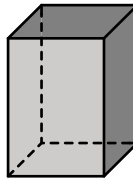
- Hexagonal prism
- Rectangular pyramid
- Octagonal pyramid

3)



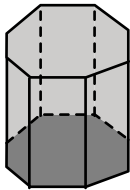
- Pentagonal prism
- Square pyramid
- Octagonal prism

4)



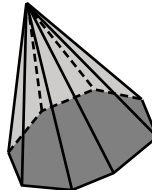
- Rectangular pyramid
- Triangular prism
- Rectangular prism

5)



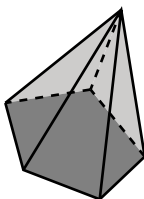
- Octagonal prism
- Rectangular pyramid
- Pentagonal pyramid

6)



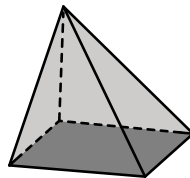
- Hexagonal pyramid
- Rectangular prism
- Octagonal pyramid

7)



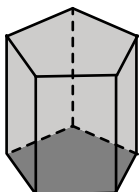
- Square pyramid
- Hexagonal prism
- Pentagonal pyramid

8)



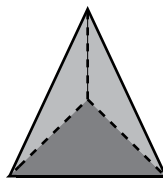
- Triangular prism
- Rectangular pyramid
- Hexagonal prism

9)



- Pentagonal prism
- Square pyramid
- Octagonal pyramid

10)



- Rectangular prism
- Pentagonal pyramid
- Triangular pyramid