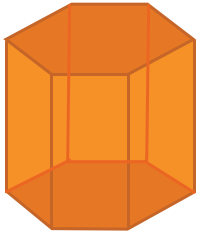


Faces, Edges, and Vertices

Write the name of each shape. Also, find the number of faces, edges and vertices.

1)



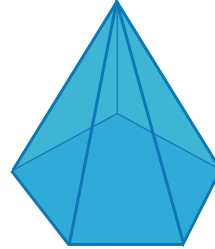
Faces

Edges

Vertices

Name: _____

2)



Faces

Edges

Vertices

Name: _____

3)



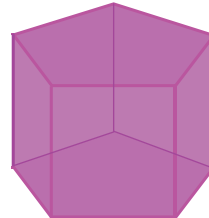
Faces

Edges

Vertices

Name: _____

4)



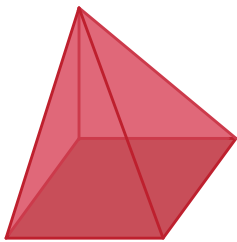
Faces

Edges

Vertices

Name: _____

5)



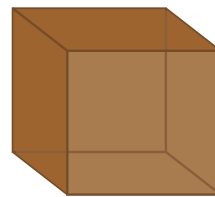
Faces

Edges

Vertices

Name: _____

6)



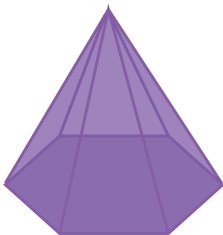
Faces

Edges

Vertices

Name: _____

7)



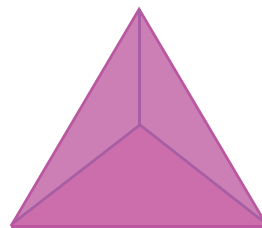
Faces

Edges

Vertices

Name: _____

8)



Faces

Edges

Vertices

Name: _____