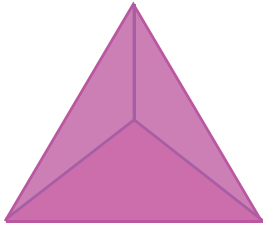


Faces, Edges, and Vertices

Write the name of each shape. Also, find the number of faces, edges and vertices.

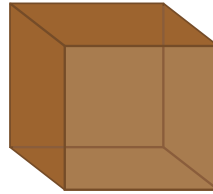
1)



Faces
Edges
Vertices

Name: _____

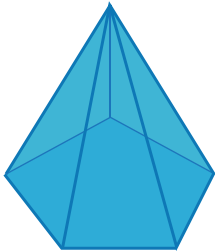
2)



Faces
Edges
Vertices

Name: _____

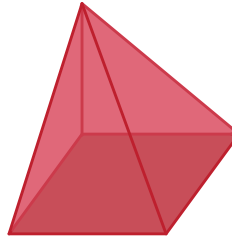
3)



Faces
Edges
Vertices

Name: _____

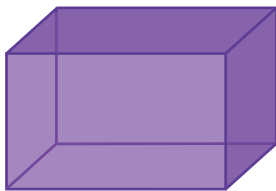
4)



Faces
Edges
Vertices

Name: _____

5)



Faces
Edges
Vertices

Name: _____

6)



Faces
Edges
Vertices

Name: _____

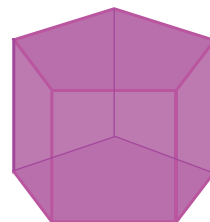
7)



Faces
Edges
Vertices

Name: _____

8)



Faces
Edges
Vertices

Name: _____