



Identify each shape as 2D or 3D, and circle the correct option.

1)



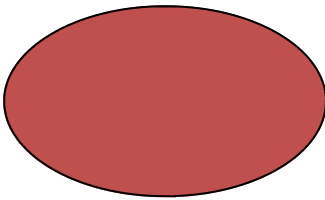
2D Shape / 3D Shape

2)




2D Shape / 3D Shape

3)



2D Shape / 3D Shape

4)




2D Shape / 3D Shape

5)




2D Shape / 3D Shape

6)




2D Shape / 3D Shape

7)



2D Shape / 3D Shape

8)



2D Shape / 3D Shape