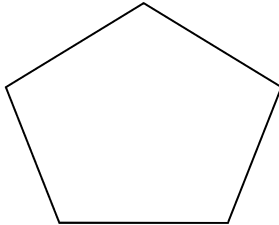



Sides and Corners

Fill up the blanks.




Pentagon has _____ sides and _____ corners.



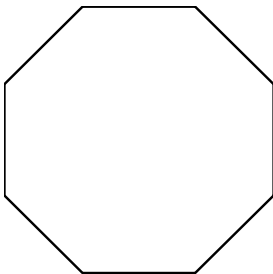
Square has _____ sides and _____ corners.



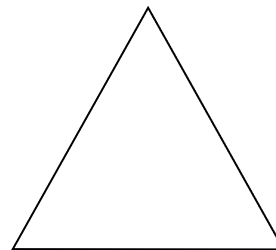
Rectangle has _____ sides and _____ corners.



Circle has _____ sides and _____ corners.



Octagon has _____ sides and _____ corners.



Triangle has _____ sides and _____ corners.